

2019

PONY

Maths


EXERCISE



1 *st.*
Primary

012 10 90 18 17

0100 42 010 98

 PONY in mathematics

Mr. Mohamed Nasa El Din

PONY

Maths

For The Primary Stage

1^{st.}

Primary

Exercises

Second term

unit 1



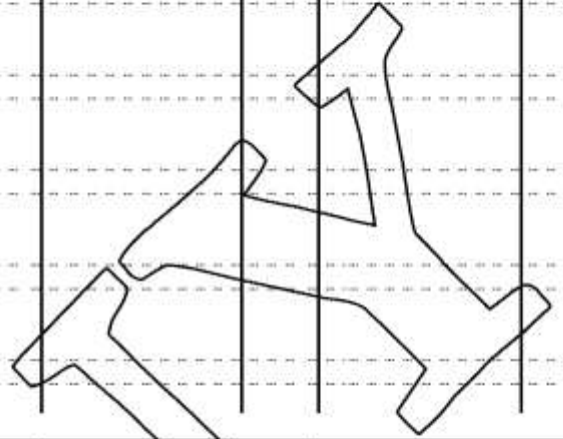
**Numbers
Up to 100**



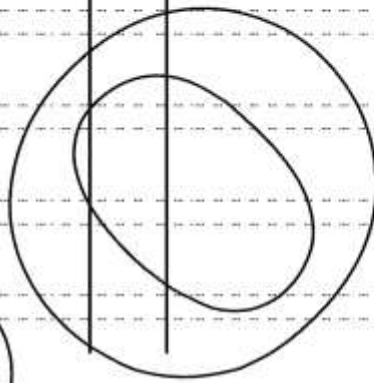
Exercises 1

Reading and Writing Numbers up to 100

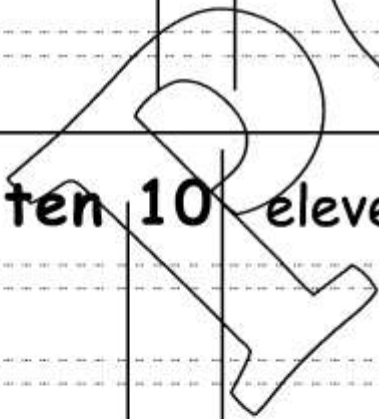
zero 0 one 1 two 2 three 3 four 4



five 5 six 6 seven 7 eight 8 nine 9



ten 10 eleven 11 twelve 12 thirteen 13



fourteen 14 fifteen 15 sixteen 16

seventeen 17 eighteen 18 nineteen 19

twenty 20 thirty 30 forty 40 fifty 50

sixty 60 seventy 70 eighty 80 ninety 90

Write in words:

12 :

16 :

20 :

60 :

11 :

15 :

19 :

50 :

90 :

14 :

18 :

40 :

80 :

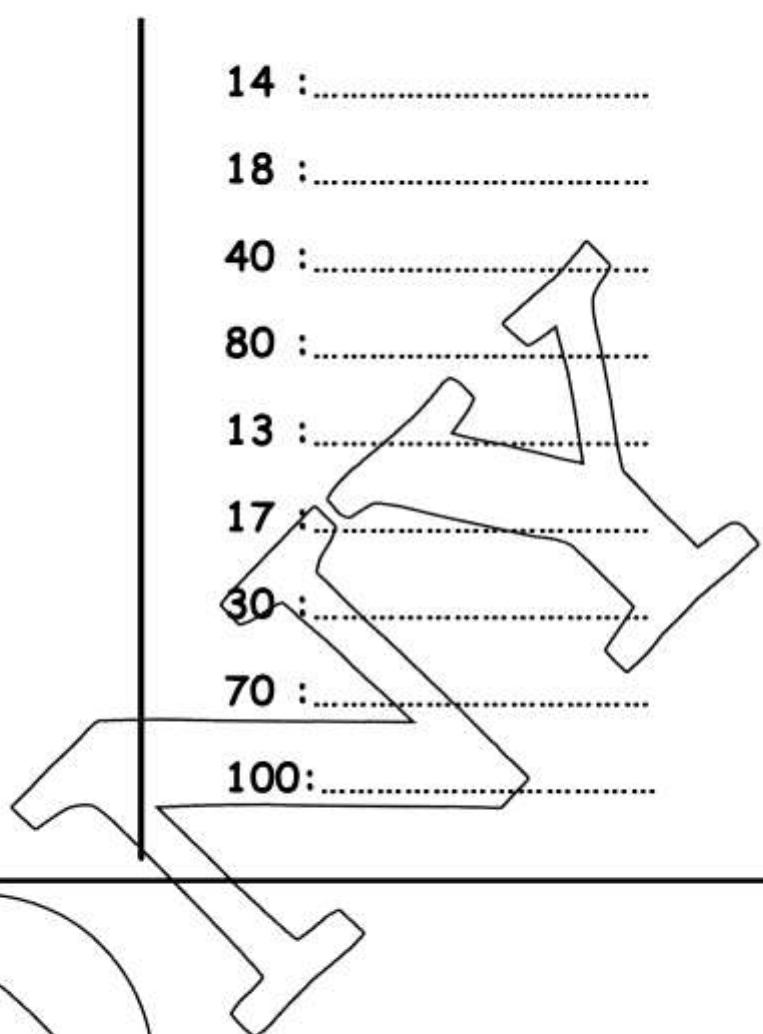
13 :

17 :

30 :

70 :

100 :



Write in digits:

Twelve :

Sixty :

Thirty :

Fifteen :

Eighty :

Sixteen :

Sixteen :

fourteen :

seventy :

nineteen :

thirteen :

fifty :

twenty :

eighteen :

eleven :

forty :

seventeen:.....

ninety :

Match

Eleven Twenty Thirteen Forty Fifteen

11 17 60 13 20 19 80 15 40 12

Sixty Seventeen Eighty Nineteen twelve

Thirty Fourteen Fifty Sixteen Seventy

30 90 18 50 14 19 10 70 16 11

Eighteen Ninety Ten Nineteen eleven

Put the suitable sign < , = or >.

20 12 sixteen 60

15 50 seventy 17

30 13 eighteen 80

90 19 twenty twelve

15 15 sixteen 16



Exercises 2

Units and Tens

Complete :

1 tens + 0 units = (in words)

2 tens + 2 units = (in words)

4 tens + 6 units = (in words)

5 tens + 8 units = (in words)

6 tens + 1 units = (in words)

7 tens + 3 units = (in words)

8 tens + 5 units = (in words)

7 units + 5 tens = (in words)

7 units + 6 tens = (in words)

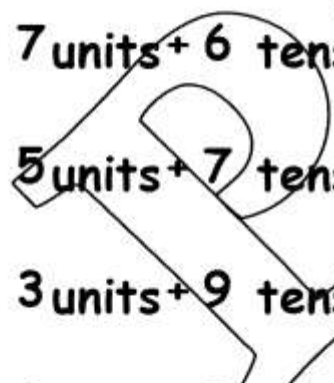
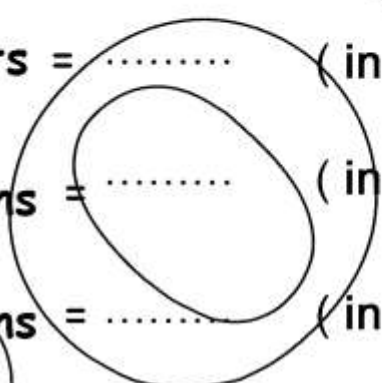
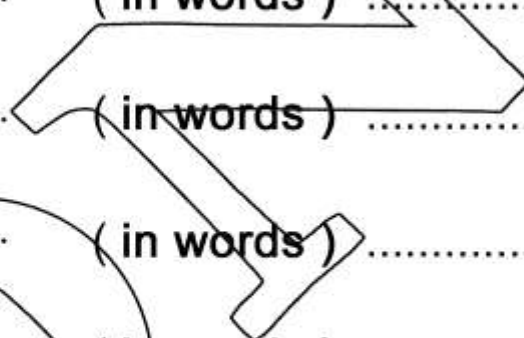
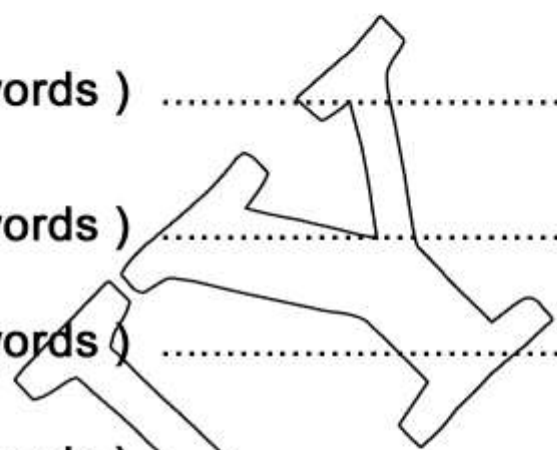
5 units + 7 tens = (in words)

3 units + 9 tens = (in words)

4 units + 3 tens = (in words)

9 units + 1 tens = (in words)

1 units + 2 tens = (in words)



Complete :

8 tens + 2 units = (in words)

7 tens + 2 units = (in words)

6 tens + 0 units = (in words)

5 tens + 0 units = (in words)

4 tens + 1 units = (in words)

3 tens + 2 units = (in words)

2 tens + 3 units = (in words)

1 tens + 3 units = (in words)

5 units + 2 tens = (in words)

7 units + 3 tens = (in words)

0 units + 1 tens = (in words)

3 units + 2 tens = (in words)

1 units + 1 tens = (in words)

2 units + 6 tens = (in words)

4 units + 4 tens = (in words)

5 units + 5 tens = (in words)

Complete :

..... Tens + units = **19** (in words)

..... Tens + units = **28** (in words)

..... Tens + units = **37** (in words)

..... Tens + units = **46** (in words)

..... Tens + units = **55** (in words)

..... Tens + units = **64** (in words)

..... Tens + units = **73** (in words)

..... Tens + units = **82** (in words)

..... units + tens = **91** (in words)

..... units + tens = **10** (in words)

..... units + tens = **21** (in words)

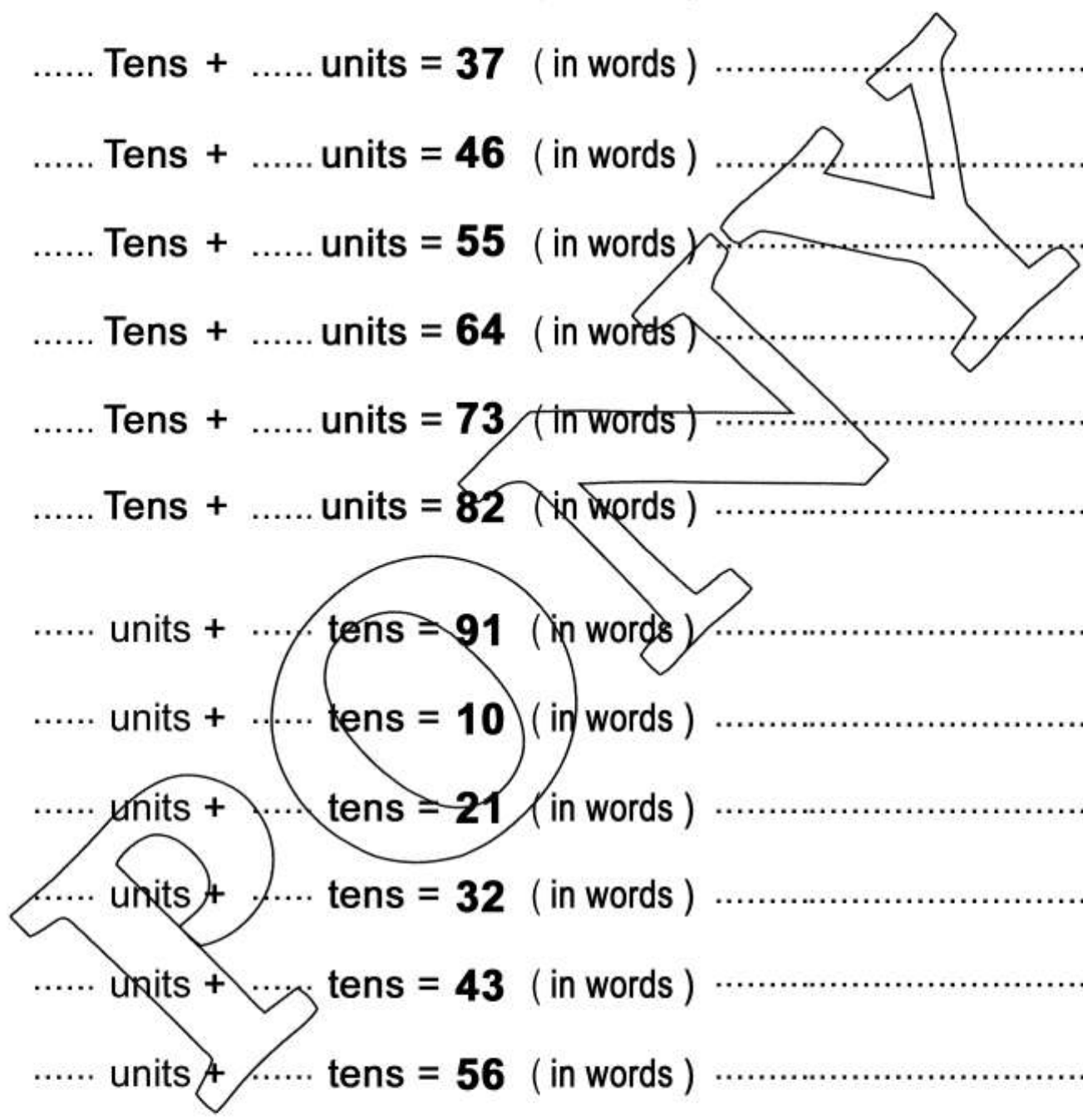
..... units + tens = **32** (in words)

..... units + tens = **43** (in words)

..... units + tens = **56** (in words)

..... units + tens = **67** (in words)

..... units + tens = **98** (in words)



Complete :

..... Tens + units = **90** (in words)

..... Tens + units = **87** (in words)

..... Tens + units = **76** (in words)

..... Tens + units = **65** (in words)

..... Tens + units = **54** (in words)

..... Tens + units = **43** (in words)

..... Tens + units = **32** (in words)

..... Tens + units = **21** (in words)

..... units + tens = **12** (in words)

..... units + tens = **5** (in words)

..... units + tens = **35** (in words)

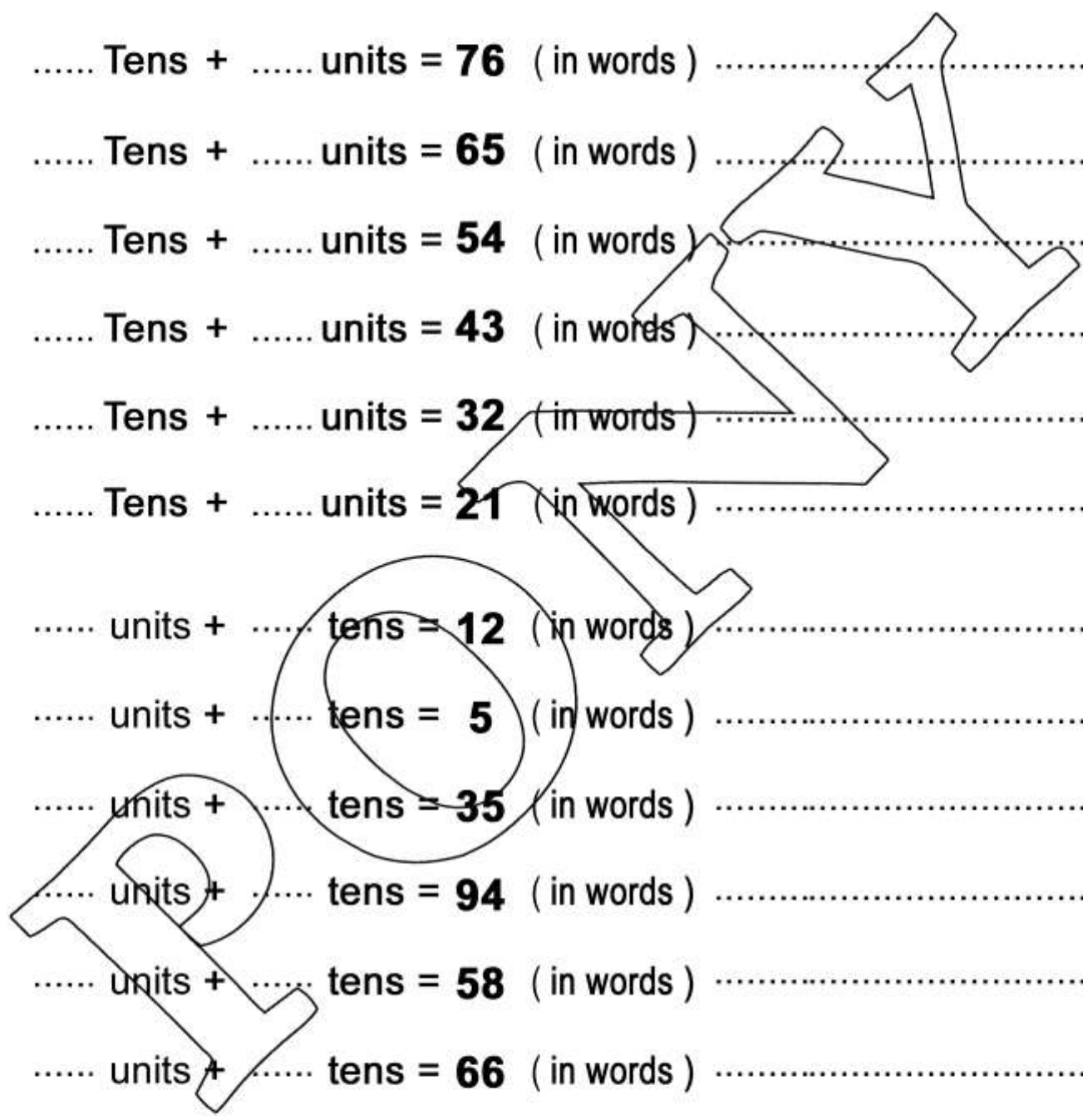
..... units + tens = **94** (in words)

..... units + tens = **58** (in words)

..... units + tens = **66** (in words)

..... units + tens = **17** (in words)

..... units + tens = **61** (in words)



Complete :

2 tens =	5 tens =	6 tens =
7 tens =	9 tens =	3 tens =
1 tens =	4 tens =	10 tens =
15 units =	8 units =	10 units =
21 units =	12 units =	2 units =
..... tens = 80 tens = 40 tens = 60
..... tens = 20 tens = 10 tens = 30
..... tens = 50 tens = 70 tens = 100
..... units = 8 units = 12 units = 27
..... units = 31 units = 5 units = 15

Complete as in the example :

64 = 60 + 4

Sixty four = 60 + 4 = 64

85 = +

Fifty six = + =

16 = +

Twenty two = + =

37 = +

Forty eight = + =

29 = +

Thirty six = + =

74 = +

Sixty two = + =



Exercises 3

The place value

Complete the following table :

The number	③ 7	④ 2	8 ⑨	6 ⑦	⑤ 9	④ 2	2 ⑤
The value
The place-value

Complete the following table :

The number	6 ②	7 ④	8 ⑤	⑨ 9	⑤ 8	④ 7	2 ⑥
The value
The place-value

Circle the value of the underlined digit

<u>7</u> 2 70 - 7	6 <u>5</u> 50 - 5	<u>8</u> 3 80 - 8	8 <u>9</u> 90 - 9	<u>3</u> 4 30 3
2 <u>3</u> 30 - 3	7 <u>4</u> 40 - 4	9 <u>1</u> 10 - 1	8 <u>5</u> 50 - 5	<u>7</u> 4 70 7
<u>8</u> 2 80 - 8	6 <u>8</u> 80 - 8	<u>4</u> 4 40 - 4	<u>9</u> 90 - 9	<u>4</u> 0 40 4
7 <u>2</u> 20 - 2	6 <u>4</u> 40 - 4	8 <u>6</u> 60 - 6	8 <u>1</u> 10 - 1	<u>8</u> 4 80 8

Compleat : the palce value of the digit 4 in :

74 is

48 is

42 is

14 is

4 is

40 is

Under line the suitable number as in the example:

<p>3 tens + 4 units</p> <p>30, 40, 43, <u>34</u></p>	<p>5 units + 7 tens</p> <p>75, 70, 50, 57</p>	<p>8 tens + 3 units</p> <p>30, 38, <u>80</u>, 83</p>
<p>4 tens + 3 units</p> <p>30, 40, 43, 34,</p>	<p>3 units + 6 tens</p> <p>60, 30, 36, 63</p>	<p>9 units + one tens</p> <p>91, 90, 10, 19</p>
<p>8 tens + 2 units</p> <p>80, 20, 28, 82</p>	<p>9 units + 3 tens</p> <p>93, 39, 99, 33</p>	<p>One unit + 3 tens</p> <p>10 13 31 30</p>

Choose the correct answer:

- 1) The place value of 4 in 34 is(4 , units , tens)
- 2) The place value of 7 in 73 is (tens , 70 , units)
- 3) The value of 5 in 5 is (50 , 5 , units)
- 4) The value of 7 in is 70 (37 , 73 , 47)

Complete :

[a] the place - value of the digit 5 in 45 is

[b] 3 tens and 5 units = + =

[c] 48 = + 8

[d] 63 (in words) =

[e] units + Tens = 59

choose the correct answer :

[a] 3 units + 6 tens = (36 or 63 or 60 or 30)

[b] 60 + 5 = (60 or 50 or 65 or 56)

[c] The value of 6 in 86 = (6 or 60 or 80 or 8)

[d] twenty five = (20 or 50 or 52 or 25)

[e] Tens = 50 (50 or 5 or 55 or 15)

Put < , = or > :

[a] 16 60

[b] 17 70

[c] fourteen 40

[d] nineteen ninety

Complete the following table :

The number	3 7	4 2	8 9	6 7	5 9	4 2	2 5
The value
The place-value

Match

Eleven	Twenty	Thirteen	Forty	Fifteen					
11	17	60	13	20	19	80	15	40	12
Sixty	Seventeen	Eighty	Nineteen	twelve					



Exercises 4

Arrange and compare numbers up to 100

Arrange the following numbers in an **ascending** order

82 , 52 , 91 , 36 , 46 , 59

..... , , , , ,

40 , 17 , 4 , 70 , 7 , 14

..... , , , , ,

25 , 19 , 87 , 36 , 64 , 52

..... , , , , ,

Arrange the following numbers in a **descending** order

50 , 90 , 20 , 60 , 40 , 70

..... , , , , ,

58 , 64 , 54 , 60 , 6 , 66

..... , , , , ,

15 , 19 , 12 , 16 , 14 , 17

..... , , , , ,

Put the suitable sign < , = or > :

15 51

12 20

Thirty - one 13

45 42

60 70

Ninety - three 39

37 73

70 17

Twenty - three 23

58 34

78 65

fifty - four 54

59 95

78 79

Eighteen 80

15 41

30 20

Thirty - six 63

4 tens 40

70 17

5 tens Fifteen

6 tens 16

50 15

7 tens Seventy

8 tens 81

30 13

9 tens Ninety

2 tens 20

10 20

1 ten Twenty

3 tens 23

90 60

6 tens sixteen

Twenty-eight Eighty - nine

Thirty Thirteen

Fifty - six Sixty - five

Ninety Nineteen

Forty - one Eighty - four

Twenty Twelve

Ninety - four Forty - nine

Eleven Twelve

seventeen seventy

Fifty-six Fifty-eight

choose the correct answer :

- [a] 6 units + 3 tens = (36 or 63 or 60 or 30)
- [b] 6 + 50 = (60 or 50 or 65 or 56)
- [c] The value of 6 in 64 = (6 or 60 or 80 or 8)
- [d] fifty two = (20 or 50 or 52 or 25)
- [e] Tens = 80 (80 or 8 or 85 or 18)

Complete :

- [a] 4 tens and 6 units = + =
- [b] the place - value of the digit 4 in 45 is
- [c] 93 (in words) =
- [d] 67 = + 60
- [e] units + Tens = 82

Put < , = or > :

- [a] 46 64 [b] 98 9 tens+8 units
- [c] fifty eight 85 [d] sixty two 6 + 20

Arrange the following numbers in an ascending order

82 , 53 , 91 , 36 , 45 , 75

..... , , , , ,

Arrange the following numbers in a descending order

50 , 55 , 5 , 15 , 51

..... , , , ,



Exercises 5

After بعد

Before قبل

Write the number just after

12 is

23 is

39 is

44 is

30 is

9 is

55 is

56 is

60 is

71 is

99 is

79 is

86 is

28 is

47 is

8 is

15 is

48 is

84 is

62 is

19 is

Write the number just before

70 is

74 is

10 is

46 is

89 is

20 is

82 is

27 is

83 is

100 is

65 is

91 is

37 is

65 is

58 is

90 is

30 is

72 is

15 is

55 is

25 is

Complet :

- The number just **after 45** is
- The number just **after 39** is
- The number just **before 60** is
- The number just **before 81** is
- The number just **after 99** is
- The number just **before 99** is
- The number just **after 17** is
- The number just **before 11** is

Complete

2 , 3 4 , , 7 , ,

..... , , 12 , 11 , , , 8

19 , 18 , , , 15 , ,

..... , 16 , , , 13 , 12 ,

34 , 35 , 36 , , , ,

66 , 67 , 68 , , , ,

100 , 99 , 98 , , , ,

44 , 43 , 42 , , , ,

1 Complete :

[a] $50 + \dots = 56$

[b] The number just **after** 55 is

[c]units +tens = 67

[d] 68 : (in words)

[e] The place -value of 7 in 67 is

2 Choose the correct answer :

[a] 5 tens + 7 units = (75 , 57 , 77 , 55)

[b] The value of 4 in 43 is (4 , 40 , 14 , 13)

[c] $35 + 4 = \dots$ (39 , 75 , 79 , 35)

[d] $40 + 30 = \dots$ (44 , 43 , 34 , 70)

[e] The greatest 2-digit number = (99 , 11 , 90 , 10)

3 Complete using the suitable sign ((< , = or >)):

[a] 46 64 | [c] 98 9 tens+8 units

[b] fifty eight 85 | [d] sixty two 6 + 20

4 Arrange the following numbers in an ascending order

53 , 91 , 36 , 45

, , ,

Arrange the following numbers in a descending order

50 , 55 , 5 , 15

, , ,



Exercises 6

Ordinal Numbers

الأول

First

الثاني

Second

الثالث

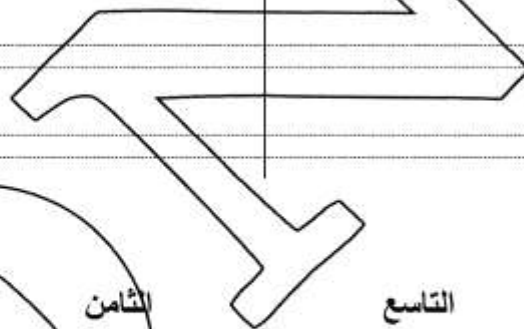
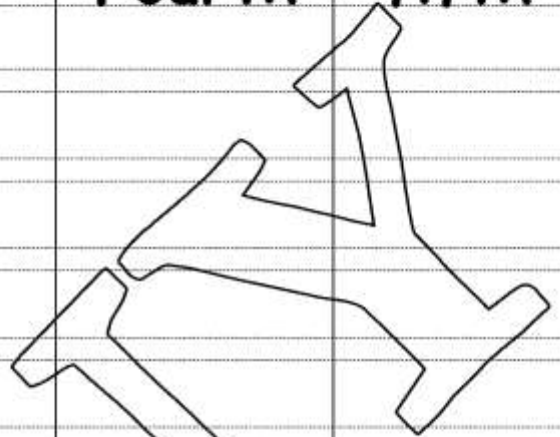
Third

الرابع

Fourth

الخامس

fifth



السادس

Sixth

السابع

Seventh

الثامن


eighth

التاسع

ninth

العاشر

Tenth



Write the order of the circled picture :



.....



.....



.....



.....



.....



.....




.....



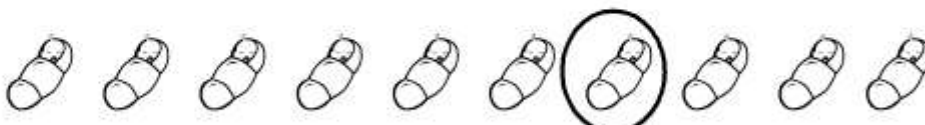
.....



.....



.....



.....

Colour according to the order :



First



Third



Fifth



Seventh



Ninth



First



Second



Fourth



Eighth



ninth



second



Tenth

Choose the correct answer :

- a** The smallest 2-digit number is (10 , 11 , 99 , 98)
- b** The number just after 70 is (79 , 69 , 71 , 78)
- c** 8 units + 3 tens = (83 , 38 , 88 , 33)
- d** seventy four = (47 , 77 , 44 , 74)
- e** The value of 7 in 73 is (7 , 77 , 70 , 30)

Complete the following:

- a** 63 = tens + units
- b** The place value of 3 in 63 is
- c** 55 , 56 , 57 , 58 , ,
- d** 40 + 3 =
- e** The greatest 2- different - digit number is

Put < , = or > :

- a** 56 65
- b** 4 tens 40
- c** 5 units + 3 tens fifty three
- d** Thirty two 3 tens + 2 units
- e** 61 sixteen

Arrange in a descending order : 67 , 84 , 34 , 59 , 64

..... , , , ,

Write the order of the circled picture :

Row 1: [Circled Figure] [Figure] [Figure] [Figure] [Figure] [Figure] [Figure] [Figure] [Figure] [Figure] [Box]

Row 2: [Figure] [Figure] [Figure] [Circled Figure] [Figure] [Figure] [Figure] [Figure] [Figure] [Figure] [Box]

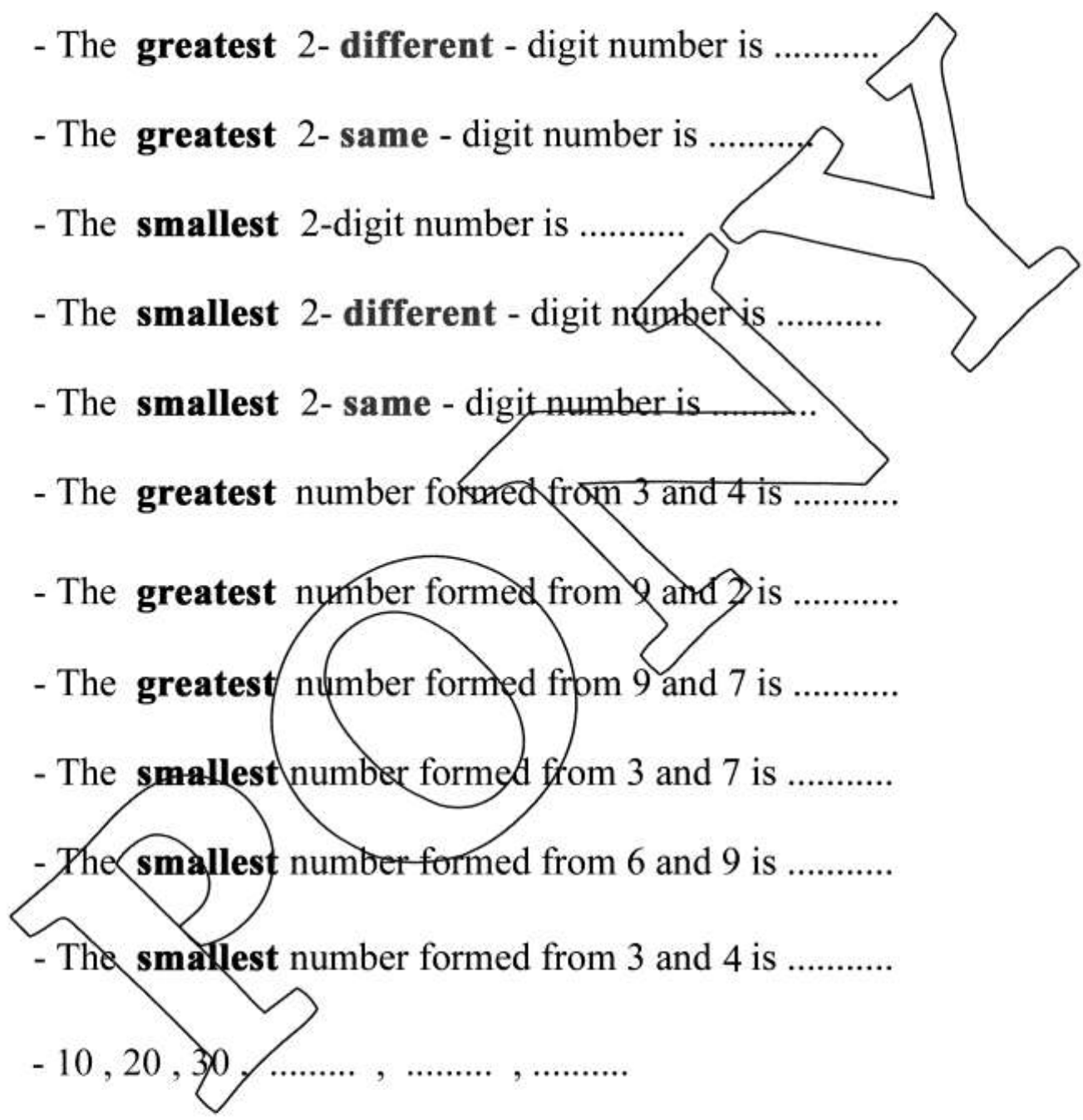
Row 3: [Figure] [Figure] [Figure] [Figure] [Figure] [Figure] [Figure] [Figure] [Figure] [Circled Figure] [Box]



Exercises 7

Complete :

- The **greatest** 2-digit number is
- The **greatest** 2- **different** - digit number is
- The **greatest** 2- **same** - digit number is
- The **smallest** 2-digit number is
- The **smallest** 2- **different** - digit number is
- The **smallest** 2- **same** - digit number is
- The **greatest** number formed from 3 and 4 is
- The **greatest** number formed from 9 and 2 is
- The **greatest** number formed from 9 and 7 is
- The **smallest** number formed from 3 and 7 is
- The **smallest** number formed from 6 and 9 is
- The **smallest** number formed from 3 and 4 is
- 10 , 20 , 30 , , ,
- 100 , 90 , 80, , ,
- 15 , 25 , 35 , , ,
- 82 , 72 , 62 , , ,



Complete the following:

- a 54: ((in words))
- b The value of 9 in 39 is
- c $30 + 4 = \dots\dots$
- d units + tens = 64
- e The number just **before** 70 is

Choose the correct answer :

- a twenty five = (20 or 50 or 52 or 25)
- b The value of 7 in 76 is (7 , 70 , 70 , 77)
- c $60 + 8 = \dots\dots\dots$ (60 or 80 or 68 or 86)
- d The number just **after** 54 is (55 , 53 , 44 , 50)
- e 7 units + 2 tens = (72 , 27 , 22 , 77)

Complete using the suitable sign ((< , = or >)):

- a 78 ninety seven
- b 4 tens + 3 units 43
- c 64 $60 + 4$
- d $20 + 50$ 25
- e 7 units + 5 ten $70 + 5$

Arrange in an ascending order : 47 , 23 , 98 , 54 , 59

, , , ,

Match:

- | | | | |
|------------|-----------|------------------|-----------------|
| thirty one | $70 + 8$ | 4 tens + 6 units | $20 + 30$ |
| forty six | $90 - 40$ | $30 + 1$ | 7 tens + 8units |

General Exercises on unit 1

Complete :

1 tens + 0 units = (in words)

2 tens + 2 units = (in words)

4 tens + 6 units = (in words)

7 units + 5 tens = (in words)

7 units + 6 tens = (in words)

5 units + 7 tens = (in words)

..... Tens + units = **19** (in words)

..... Tens + units = **28** (in words)

..... Tens + units = **37** (in words)

..... units + tens = **10** (in words)

..... units + tens = **21** (in words)

..... units + tens = **32** (in words)

7 tens =

1 tens =

..... **tens** = **50**

..... **units** = **8**

9 tens =

4 tens =

..... **tens** = **70**

..... **units** = **12**

3 tens =

10 tens =

..... **tens** = **100**

..... **units** = **27**

Complete the following table :

The number	3 7	4 2	8 9	6 7	5 9	4 2	2 5
The value
The place-value

Complete the following table :

The number	6 2	7 4	8 5	9 9	5 8	4 7	2 6
The value
The place-value

Arrange the following numbers in an **ascending** order

52 , 91 , 36 , 46

40 , 17 , 4 , 70

.....
-------	-------	-------	-------	-------	-------	-------	-------

36 , 64 , 52 , 14

25 , 19 , 87 , 7

.....
-------	-------	-------	-------	-------	-------	-------	-------

Arrange the following numbers in a **descending** order

50 , 90 , 20 , 60

12 , 16 , 14 , 17

.....
-------	-------	-------	-------	-------	-------	-------	-------

64 , 54 , 60 , 6

40 , 70 , 17 , 15

.....
-------	-------	-------	-------	-------	-------	-------	-------

Put the suitable sign < , = or > :

15 <input type="checkbox"/>	51	12 <input type="checkbox"/>	20	Thirty - one <input type="checkbox"/>	13
45 <input type="checkbox"/>	42	60 <input type="checkbox"/>	70	Ninety - three <input type="checkbox"/>	39
8 tens <input type="checkbox"/>	81	30 <input type="checkbox"/>	13	9 tens <input type="checkbox"/>	Ninety
2 tens <input type="checkbox"/>	20	10 <input type="checkbox"/>	20	1 ten <input type="checkbox"/>	Twenty
Twenty-eight <input type="checkbox"/>	Eighty - nine	Thirty <input type="checkbox"/>	Thirteen		
Fifty- six <input type="checkbox"/>	Sixty- five	Ninety <input type="checkbox"/>	Nineteen		
Forty - one <input type="checkbox"/>	Eighty - four	Twenty <input type="checkbox"/>	Twelve		

Complet :

- The number just **after 39** is
- The number just **before 60** is
- The number just **before 81** is
- The number just **after 99** is
- The number just **before 99** is
- The number just **after 17** is

Complet :

- 34 , 35 , 36 , , , ,
- 66 , 67 , 68 , , , ,
- 100 , 99 , 98 , , , ,
- 44 , 43 , 42 , , , ,

Write the order of the circled picture :

Complete :

- The **greatest** 2-digit number is
- The **greatest** 2- **different** - digit number is
- The **greatest** 2- **same** - digit number is
- The **smallest** 2-digit number is
- The **smallest** 2- **different** - digit number is
- The **smallest** 2- **same** - digit number is
- The **greatest** number formed from 3 and 4 is
- The **smallest** number formed from 3 and 7 is

unit 2



Adding and
Subtracting
Numbers up to 100



Exercises 1

Adding 2-digit numbers up to 100

Find the result

$$\begin{array}{r} 45 \\ + 1 \\ \hline \dots\dots\dots \end{array}$$

$$\begin{array}{r} 37 \\ + 1 \\ \hline \dots\dots\dots \end{array}$$

$$\begin{array}{r} 65 \\ + 1 \\ \hline \dots\dots\dots \end{array}$$

$$\begin{array}{r} 41 \\ + 3 \\ \hline \dots\dots\dots \end{array}$$

$$\begin{array}{r} 22 \\ + 3 \\ \hline \dots\dots\dots \end{array}$$

$$\begin{array}{r} 26 \\ + 2 \\ \hline \dots\dots\dots \end{array}$$

$$\begin{array}{r} 23 \\ + 5 \\ \hline \dots\dots\dots \end{array}$$

$$\begin{array}{r} 17 \\ + 1 \\ \hline \dots\dots\dots \end{array}$$

$$\begin{array}{r} 12 \\ + 43 \\ \hline \dots\dots\dots \end{array}$$

$$\begin{array}{r} 14 \\ + 85 \\ \hline \dots\dots\dots \end{array}$$

$$\begin{array}{r} 25 \\ + 24 \\ \hline \dots\dots\dots \end{array}$$

$$\begin{array}{r} 34 \\ + 42 \\ \hline \dots\dots\dots \end{array}$$

$$\begin{array}{r} 38 \\ + 11 \\ \hline \dots\dots\dots \end{array}$$

$$\begin{array}{r} 26 \\ + 42 \\ \hline \dots\dots\dots \end{array}$$

$$\begin{array}{r} 13 \\ + 25 \\ \hline \dots\dots\dots \end{array}$$

$$\begin{array}{r} 27 \\ + 51 \\ \hline \dots\dots\dots \end{array}$$

$$\begin{array}{r} 56 \\ + 13 \\ \hline \dots\dots\dots \end{array}$$

$$\begin{array}{r} 32 \\ + 61 \\ \hline \dots\dots\dots \end{array}$$

$$\begin{array}{r} 21 \\ + 73 \\ \hline \dots\dots\dots \end{array}$$

$$\begin{array}{r} 12 \\ + 53 \\ \hline \dots\dots\dots \end{array}$$

$$\begin{array}{r} 36 \\ + 41 \\ \hline \dots\dots\dots \end{array}$$

$$\begin{array}{r} 33 \\ + 52 \\ \hline \dots\dots\dots \end{array}$$

$$\begin{array}{r} 21 \\ + 38 \\ \hline \dots\dots\dots \end{array}$$

$$\begin{array}{r} 51 \\ + 42 \\ \hline \dots\dots\dots \end{array}$$

Find the result

$$\begin{array}{r} 43 \\ + 13 \\ + 42 \\ \hline \end{array}$$

.....

$$\begin{array}{r} 41 \\ + 11 \\ + 35 \\ \hline \end{array}$$

.....

$$\begin{array}{r} 14 \\ + 23 \\ + 41 \\ \hline \end{array}$$

.....

$$\begin{array}{r} 34 \\ + 23 \\ + 22 \\ \hline \end{array}$$

.....

$$\begin{array}{r} 41 \\ + 44 \\ + 2 \\ \hline \end{array}$$

.....

$$\begin{array}{r} 53 \\ + 33 \\ + 1 \\ \hline \end{array}$$

.....

$$\begin{array}{r} 21 \\ + 21 \\ + 21 \\ \hline \end{array}$$

.....

$$\begin{array}{r} 22 \\ + 22 \\ + 22 \\ \hline \end{array}$$

.....

choose the correct answer :

- [a] the smallest 2 digit number is (10 , 11 , 99 , 98)
- [b] the number just before 45 is (44 , 40 , 46 , 55)
- [c] 4 units + 7 tens = (74 , 47 , 77 , 44)
- [d] sixty eight = (68 , 88 , 66 , 86)
- [e] the place-value of 8 in 85 is (units , tens)

Complete :

- [a] 57 = tens + units
- [b] the value of the digit 5 in 85 is
- [c] 65 , 64 , 63 , 62 , , ,
- [d] 50 + = 58
- [e] the greatest 2 - different - digit number is

Put < , = or > :

Twenty-nine

92

60

sixteen

6 + 50

Sixty-five

18

eighteen

67

7 units , 6 tens

Twenty

Twelve

Find the result

24 + 21 =

15 + 13 =

48 + 21 =

26 + 23 =

42 + 47 =

34 + 30 =

27 + 10 =

17 + 12 =

34 + 5 =

12 + 12 =

31 + 41 =

52 + 22 =

62 + 4 =

34 + 53 =

36 + 42 =

45 + 43 =

66 + 3 =

22 + 57 =

13 + 23 =

32 + 2 =

51 + 26 =

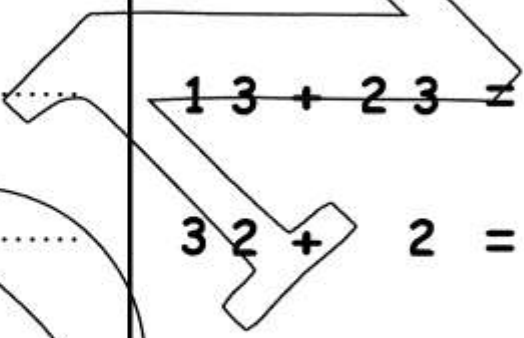
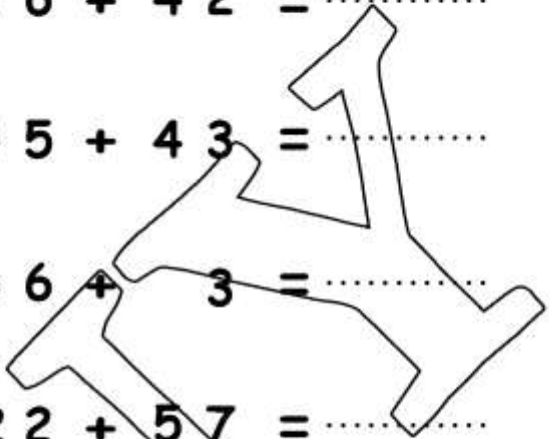
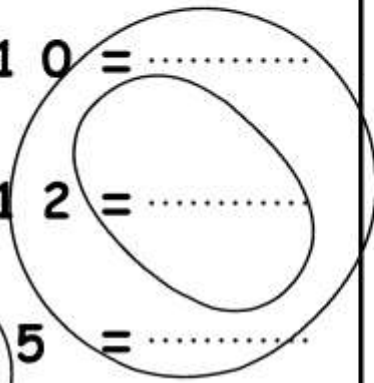
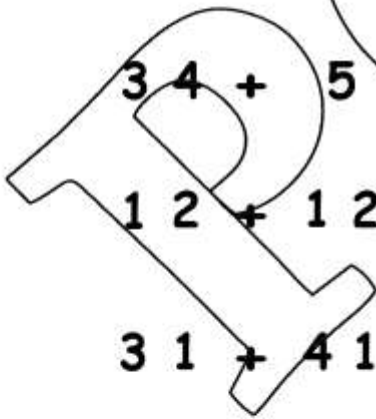
63 + 5 =

2 + 47 =

63 + 13 =

52 + 42 =

6 + 52 =



Find the result

23 + 21 + 14 =

32 + 4 + 23 =

42 + 34 + 3 =

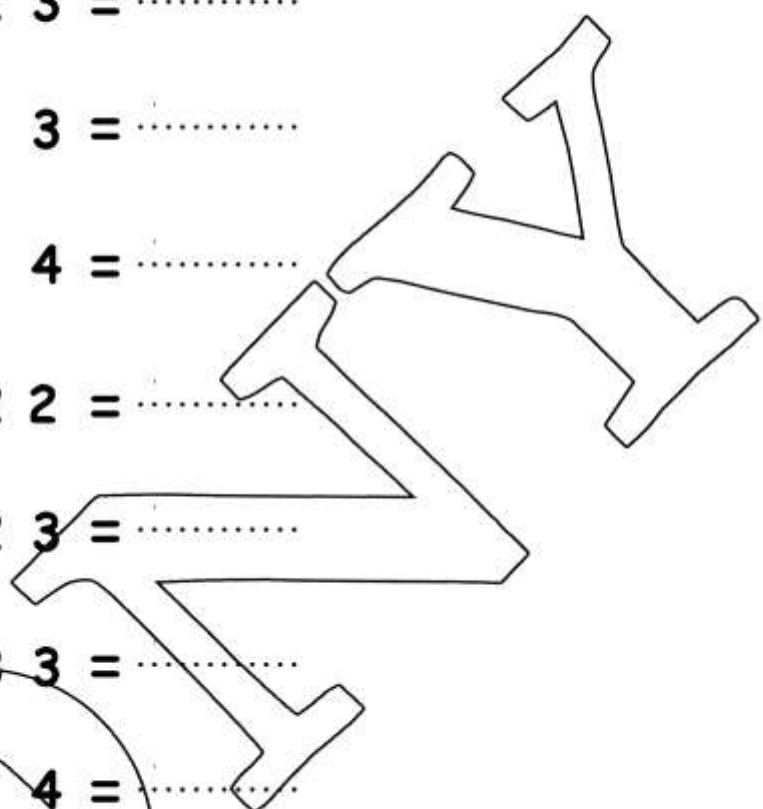
13 + 11 + 14 =

33 + 44 + 22 =

32 + 34 + 23 =

33 + 33 + 33 =

43 + 11 + 4 =



Match:

$23 + 32$	$54 + 45$	$24 + 42$	$16 + 61$
$63 + 36$	$52 + 25$	$14 + 41$	$15 + 51$
$22 + 22$	$44 + 44$	$22 + 44$	$11 + 11$
$62 + 26$	$31 + 13$	$20 + 2$	$33 + 33$

Find the result :

45 + 23 =

42 + 54 =

60 + 4 =

$$\begin{array}{r} 36 \\ + 23 \\ \hline \end{array}$$

$$\begin{array}{r} 54 \\ + 4 \\ \hline \end{array}$$

$$\begin{array}{r} 34 \\ - 34 \\ \hline \end{array}$$

choose the correct answer :

- [a] the greatest 2 digit number is (10 , 11 , 99 , 98)
- [b] the number just before 41 is (44 , 40 , 46 , 55)
- [c] 4 units + 7 tens = (74 , 47 , 77 , 44)
- [d] eighty sixt = (68 , 88 , 66 , 86)
- [e] the place-value of 5 in 85 is (units , tens)

Complete :

- [a] 75 = tens + units
- [b] the value of the digit 8 in 85 is
- [c] 65 , 64 , 63 , 62 , , ,
- [d] 50 + = 58
- [e] the smallest 2 - different - digit number is

Put < , = or > :

Twenty-nine

92

60 sixteen

6 + 50

Sixty-five

18 eighteen

67

7 units , 6 tens

Twenty Twelve

Arrange the following numbers in an ascending order

20 , 12 , 22 , 2 , 21
 , , , ,



Exercises 2

Adding 2-digit numbers
up to 100 (by renaming)

Add

$$\begin{array}{r} 57 \\ + 5 \\ \hline \end{array}$$

.....

$$\begin{array}{r} 49 \\ + 6 \\ \hline \end{array}$$

.....

$$\begin{array}{r} 47 \\ + 7 \\ \hline \end{array}$$

.....

$$\begin{array}{r} 24 \\ + 9 \\ \hline \end{array}$$

.....

$$\begin{array}{r} 31 \\ + 9 \\ \hline \end{array}$$

.....

$$\begin{array}{r} 45 \\ + 17 \\ \hline \end{array}$$

.....

$$\begin{array}{r} 67 \\ + 18 \\ \hline \end{array}$$

.....

$$\begin{array}{r} 84 \\ + 9 \\ \hline \end{array}$$

.....

$$\begin{array}{r} 24 \\ + 28 \\ \hline \end{array}$$

.....

$$\begin{array}{r} 37 \\ + 36 \\ \hline \end{array}$$

.....

$$\begin{array}{r} 28 \\ + 8 \\ \hline \end{array}$$

.....

$$\begin{array}{r} 36 \\ + 7 \\ \hline \end{array}$$

.....

$$\begin{array}{r} 48 \\ + 6 \\ \hline \end{array}$$

.....

$$\begin{array}{r} 19 \\ + 5 \\ \hline \end{array}$$

.....

$$\begin{array}{r} 78 \\ + 4 \\ \hline \end{array}$$

.....

$$\begin{array}{r} 37 \\ + 27 \\ \hline \end{array}$$

.....

$$\begin{array}{r} 57 \\ + 16 \\ \hline \end{array}$$

.....

$$\begin{array}{r} 69 \\ + 25 \\ \hline \end{array}$$

.....

$$\begin{array}{r} 25 \\ + 38 \\ \hline \end{array}$$

.....

$$\begin{array}{r} 14 \\ + 36 \\ \hline \end{array}$$

.....

$$\begin{array}{r} 35 \\ + 36 \\ \hline \end{array}$$

.....

$$\begin{array}{r} 47 \\ + 16 \\ \hline \end{array}$$

.....

$$\begin{array}{r} 54 \\ + 38 \\ \hline \end{array}$$

.....

$$\begin{array}{r} 34 \\ + 27 \\ \hline \end{array}$$

.....

$$\begin{array}{r} 23 \\ + 19 \\ \hline \end{array}$$

.....

$$\begin{array}{r} 23 \\ + 18 \\ \hline \end{array}$$

.....

$$\begin{array}{r} 15 \\ + 47 \\ \hline \end{array}$$

.....

$$\begin{array}{r} 14 \\ + 56 \\ \hline \end{array}$$

.....

$$\begin{array}{r} 37 \\ + 39 \\ \hline \end{array}$$

.....

$$\begin{array}{r} 15 \\ + 36 \\ \hline \end{array}$$

.....

$$\begin{array}{r} 15 \\ + 39 \\ + 36 \\ \hline \end{array}$$

.....

$$\begin{array}{r} 14 \\ 47 \\ + 6 \\ \hline \end{array}$$

.....

$$\begin{array}{r} 57 \\ 16 \\ + 8 \\ \hline \end{array}$$

.....

$$\begin{array}{r} 14 \\ 4 \\ + 7 \\ \hline \end{array}$$

.....

$$\begin{array}{r} 23 \\ + 25 \\ + 18 \\ \hline \end{array}$$

.....

$$\begin{array}{r} 15 \\ + 37 \\ + 47 \\ \hline \end{array}$$

.....

$$\begin{array}{r} 14 \\ + 7 \\ + 56 \\ \hline \end{array}$$

.....

$$\begin{array}{r} 37 \\ + 18 \\ + 39 \\ \hline \end{array}$$

.....

Complete :

- a) The smallest 2-different- digit number is
- b) The greatest 2-different- digit number is
- c) 5 units + 3 Tens =
- d) Tens + Units = 74
- e) 73 , 72 , 71 , , ,
- f) 23 , 24 , 25 , , ,
- g) The place-value of 3 in 83 is
- h) The value of 4 in 49 is
- i) The number just after 38 is
- j) The number just before 70 is.
- k) 40 + = 48

Add

$37 + 9 = \dots\dots$

$27 + 5 = \dots\dots$

$47 + 8 = \dots\dots$

$56 + 7 = \dots\dots$

$85 + 7 = \dots\dots$

$69 + 5 = \dots\dots$

$25 + 5 = \dots\dots$

$37 + 9 = \dots\dots$

$57 + 19 = \dots\dots$

$38 + 49 = \dots\dots$

$24 + 29 = \dots\dots$

$45 + 45 = \dots\dots$

$75 + 19 = \dots\dots$

$69 + 15 = \dots\dots$

$55 + 27 = \dots\dots$

$47 + 29 = \dots\dots$

$46 + 46 = \dots\dots$

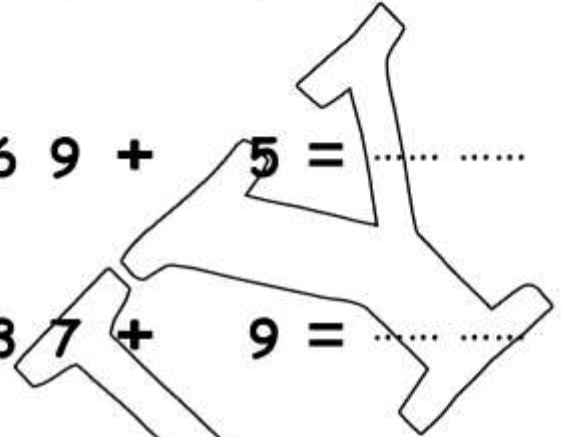
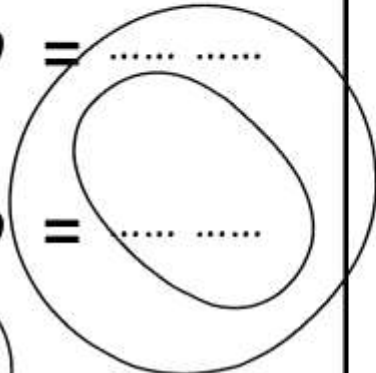
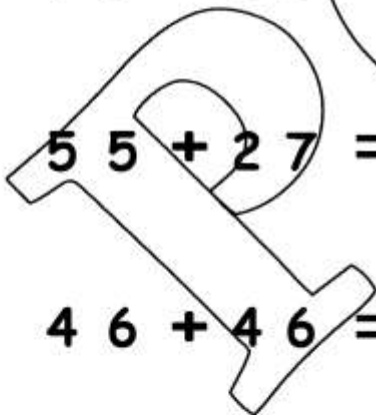
$37 + 57 = \dots\dots$

$89 + 1 = \dots\dots$

$69 + 21 = \dots\dots$

$77 + 13 = \dots\dots$

$65 + 25 = \dots\dots$



$$23 + 15 + 19 = \dots\dots$$

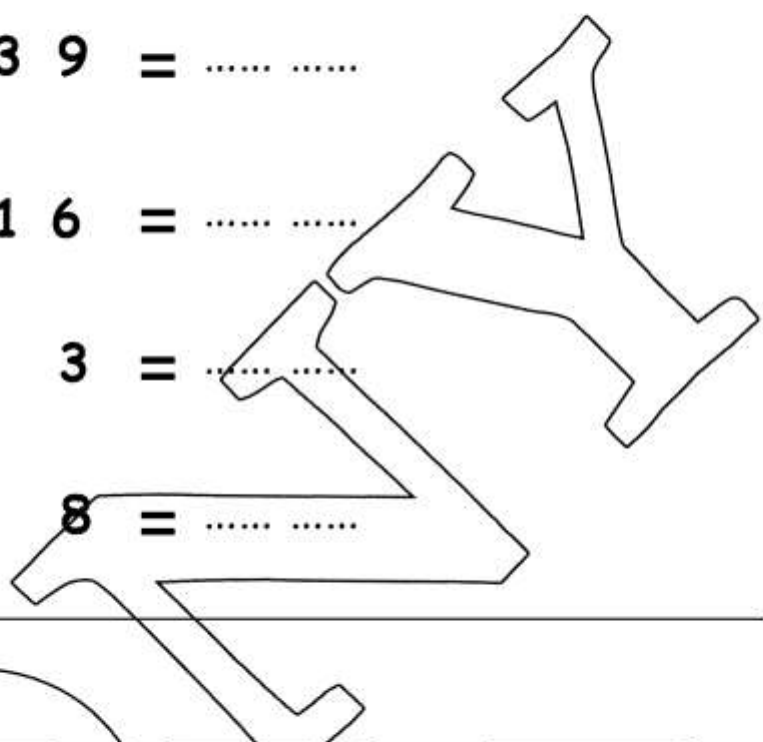
$$35 + 15 + 29 = \dots\dots$$

$$36 + 19 + 39 = \dots\dots$$

$$26 + 35 + 16 = \dots\dots$$

$$19 + 38 + 3 = \dots\dots$$

$$38 + 8 + 8 = \dots\dots$$



Match:

$$26 + 38$$

$$45 + 45$$

$$63 + 29$$

$$75 + 9$$

$$63 + 27$$

$$46 + 38$$

$$19 + 45$$

$$44 + 48$$

$$65 + 28$$

$$44 + 36$$

$$49 + 29$$

$$34 + 39$$

$$53 + 27$$

$$45 + 48$$

$$19 + 54$$

$$39 + 39$$

Find

45 + 38 =

46

79

35

56 + 5 =

+ 47

+ 18

+ 52

53 + 17 + 19 =

Complete :

a) The smallest 2-different-digit number is

b) The place-value of 8 in 83 is

c) Tens + Units = 47

d) 74, 73, 72,,,

e) The number just after 88 is

Choose the correct answer :

a) The value of 9 in 49 is (9 , 4 , 90 , 40)

b) 3 units + 5 Tens = (35 , 53 , 33 , 55)

c) The number just before 80 is (81 , 70 , 79 , 89)

d) 40 + = 45 (5 , 50 , 4 , 40)

e) The greatest 2-different-digit number is (10 , 11 , 99 , 98)

Put < , = , > :

23 + 56 34 + 45

5 tens + 6 units 65

67 + 13 Seventy

5 + 70 57

Arrange in a descending order :

56 , 79 , 34 , 21 , 50



Exercises 3

Subtracting 2-digit numbers up to 100

Find the result

$$\begin{array}{r} 53 \\ - 2 \\ \hline \end{array}$$

.....

$$\begin{array}{r} 68 \\ - 3 \\ \hline \end{array}$$

.....

$$\begin{array}{r} 42 \\ - 1 \\ \hline \end{array}$$

.....

$$\begin{array}{r} 56 \\ - 3 \\ \hline \end{array}$$

.....

$$\begin{array}{r} 84 \\ - 2 \\ \hline \end{array}$$

.....

$$\begin{array}{r} 76 \\ - 3 \\ \hline \end{array}$$

.....

$$\begin{array}{r} 35 \\ - 3 \\ \hline \end{array}$$

.....

$$\begin{array}{r} 46 \\ - 2 \\ \hline \end{array}$$

.....

$$\begin{array}{r} 95 \\ - 63 \\ \hline \end{array}$$

.....

$$\begin{array}{r} 45 \\ - 34 \\ \hline \end{array}$$

.....

$$\begin{array}{r} 68 \\ - 42 \\ \hline \end{array}$$

.....

$$\begin{array}{r} 75 \\ - 64 \\ \hline \end{array}$$

.....

$$\begin{array}{r} 62 \\ - 51 \\ \hline \end{array}$$

.....

$$\begin{array}{r} 43 \\ - 21 \\ \hline \end{array}$$

.....

$$\begin{array}{r} 32 \\ - 11 \\ \hline \end{array}$$

.....

$$\begin{array}{r} 89 \\ - 67 \\ \hline \end{array}$$

.....

$$\begin{array}{r} 82 \\ - 61 \\ \hline \end{array}$$

.....

$$\begin{array}{r} 63 \\ - 51 \\ \hline \end{array}$$

.....

$$\begin{array}{r} 74 \\ - 43 \\ \hline \end{array}$$

.....

$$\begin{array}{r} 94 \\ - 82 \\ \hline \end{array}$$

.....

$$\begin{array}{r} 52 \\ - 41 \\ \hline \end{array}$$

.....

$$\begin{array}{r} 69 \\ - 36 \\ \hline \end{array}$$

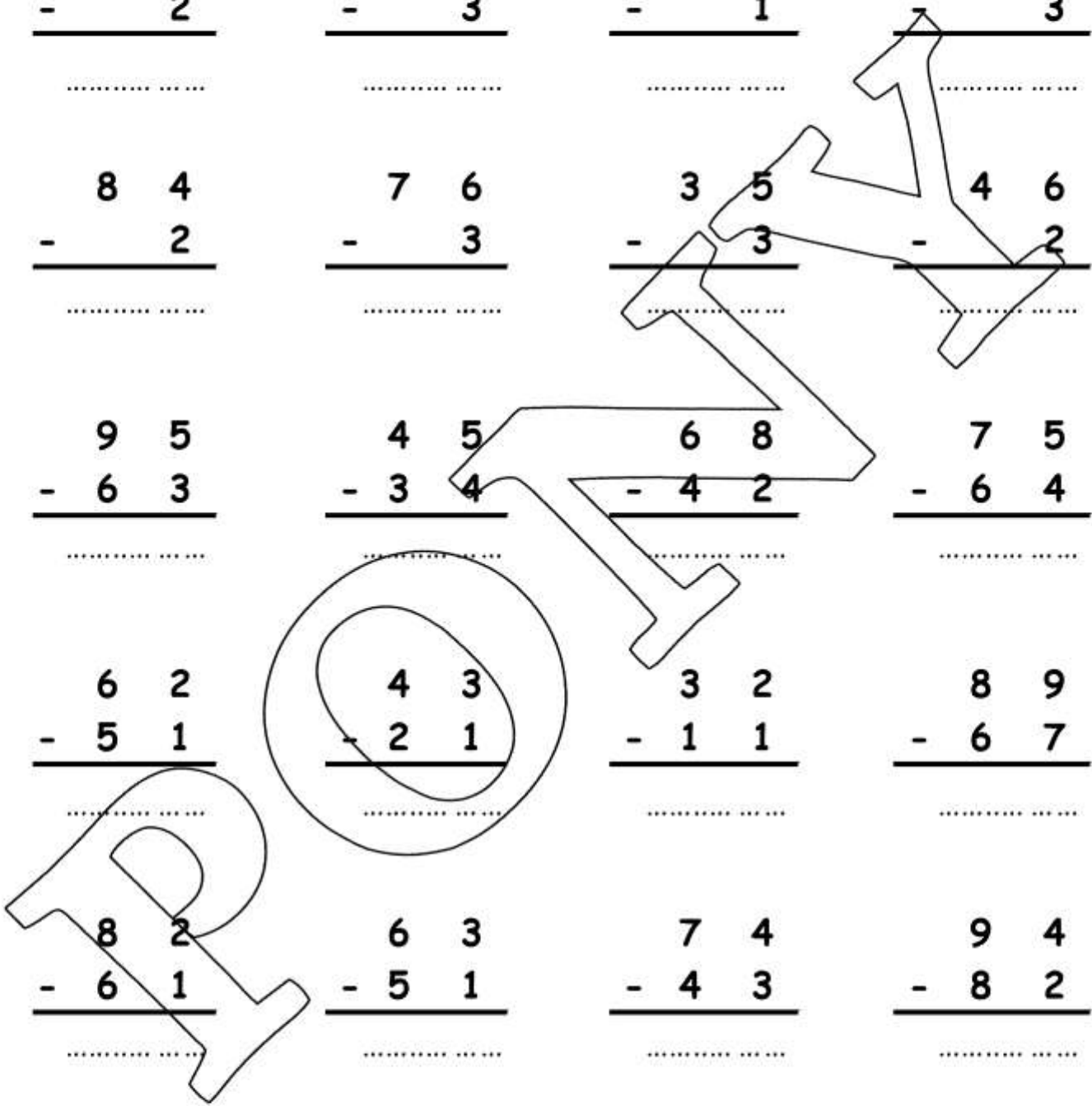
.....

$$\begin{array}{r} 84 \\ - 73 \\ \hline \end{array}$$

.....

$$\begin{array}{r} 25 \\ - 14 \\ \hline \end{array}$$

.....



Subtract :

$39 - 7 = \dots\dots\dots$

$27 - 5 = \dots\dots\dots$

$48 - 8 = \dots\dots\dots$

$56 - 5 = \dots\dots\dots$

$85 - 2 = \dots\dots\dots$

$69 - 5 = \dots\dots\dots$

$25 - 5 = \dots\dots\dots$

$37 - 4 = \dots\dots\dots$

$59 - 19 = \dots\dots\dots$

$38 - 37 = \dots\dots\dots$

$94 - 22 = \dots\dots\dots$

$45 - 45 = \dots\dots\dots$

$76 - 15 = \dots\dots\dots$

$69 - 15 = \dots\dots\dots$

$55 - 24 = \dots\dots\dots$

$47 - 24 = \dots\dots\dots$

$46 - 46 = \dots\dots\dots$

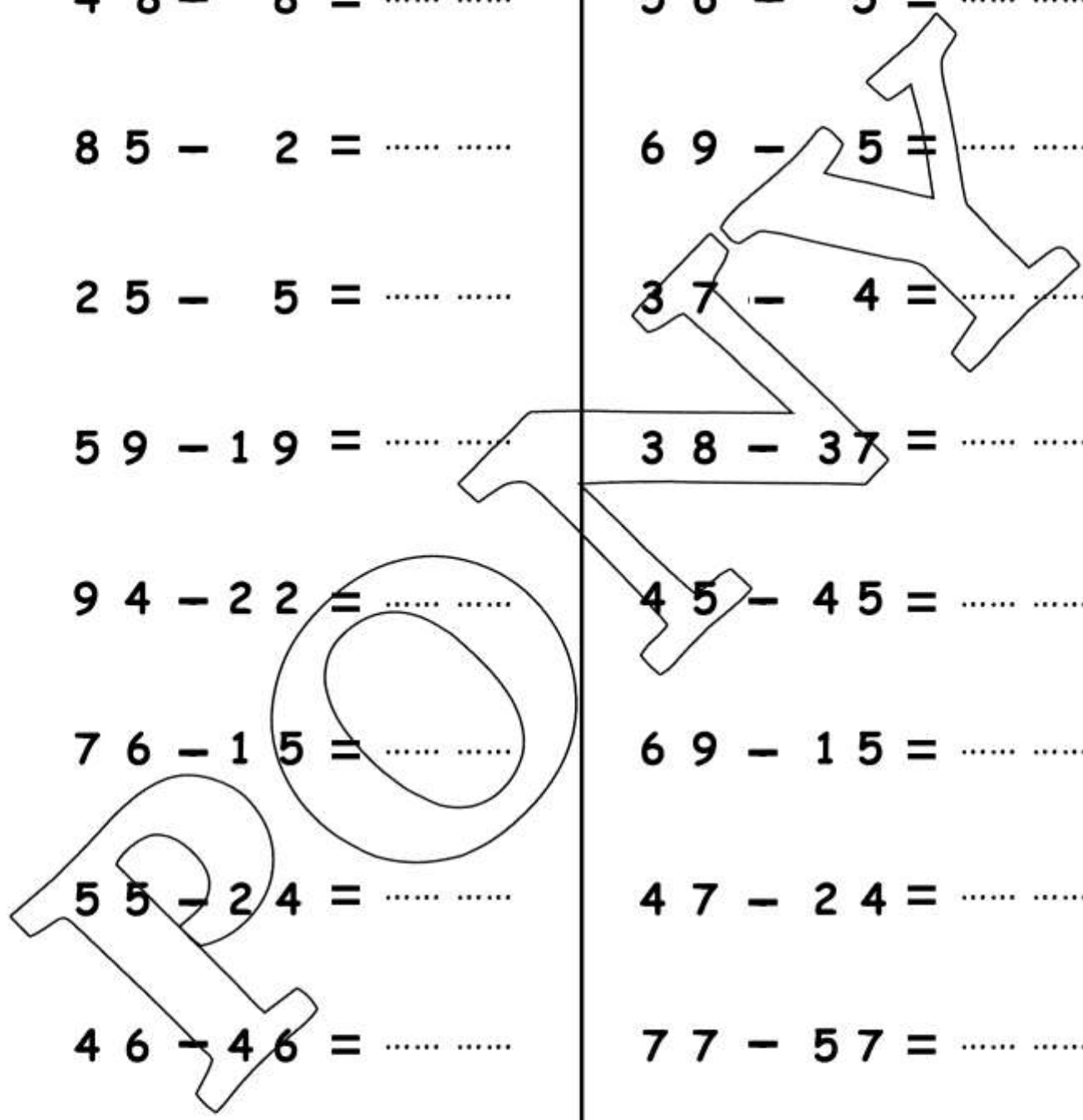
$77 - 57 = \dots\dots\dots$

$89 - 1 = \dots\dots\dots$

$69 - 21 = \dots\dots\dots$

$77 - 13 = \dots\dots\dots$

$65 - 25 = \dots\dots\dots$



Find

$13 + 38 = \dots\dots\dots$

46

79

98

$56 - 5 = \dots\dots\dots$

$$\begin{array}{r} 46 \\ + 4 \\ \hline \dots\dots\dots \end{array}$$

$$\begin{array}{r} 79 \\ - 18 \\ \hline \dots\dots\dots \end{array}$$

$$\begin{array}{r} 98 \\ - 52 \\ \hline \dots\dots\dots \end{array}$$

$33 + 17 + 9 = \dots\dots\dots$

Complete :

a) The smallest 2- digit number is

b) The place-value of 7 in 47 is

c)Tens + Units = 83

d) 24, 23, 22,,,

e) The number just after 33 is

Choose the correct answer :

a) The value of 8 in 85 is (8, 5, 80, 50)

b) 3 units + 8Tens = (38, 83, 33, 88)

c) The number just before 50 is (51, 40, 49, 59)

d) $50 + \dots\dots\dots = 54$ (5, 50, 4, 40)

e) The greatest 2- digit number is (10, 11, 99, 98)

Put <, =, > :

$34 + 45$ $23 + 56$

5 tens + 6 units 56

$17 + 63$ Seventy

$5 + 70$ 57

Arrange in a descending order :

56, 99, 14, 21, 59

Exercises on Addition and Subtraction

Complete using (< , = or >)

45 + 35 70

45 - 22 2 tens + 3 units

78 - 43 35

64 + 28 36 - 24

72 35 + 27

26 + 26 4 tens + 2 units

78 79 - 0

34 + 34 43 + 43

23 + 45 86

25 + 35 80 - 20

89 - 36 35

67 + 33 10 tens

45 73 - 32

65 - 35 73 - 42

45 48 + 7

79 units 7 + 90

89 + 6 95

43 - 33 10 tens

Complete

$56 + 22 < \square$

$\square < 68 - 67$

$56 + 22 > \square$

$\square > 69 - 56$

$56 + 22 = \square$

$\square = 78 - 45$

$\square < 36 + 63$

$48 - 34 < \square$

$\square > 56 + 37$

$48 - 34 > \square$

$\square = 94 + 6$

$48 - 34 = \square$

Match:

$34 + 25$

$73 + 26$

$45 + 29$

$23 + 19$

$100 - 1$

$78 - 36$

$99 - 40$

$87 - 13$

$23 + 36$

$48 + 22$

$18 + 17$

$42 + 38$

$90 - 20$

$89 - 30$

$97 - 17$

$68 - 33$

Match:

$34 + 25$

$65 + 32$

$15 + 25$

$38 + 23$

$99 - 2$

$89 - 30$

$97 - 36$

$70 - 30$

Complete :

- a) The smallest 2- same - digit number is
- b) The place-value of 8 in 83 is
- c)Tens + Units = 47
- d) 74 , 73 , 72 , , ,
- e) The number just after 88 is

Choose the correct answer :

- a) The value of 9 in 49 is (9 , 4 , 90 , 40)
- b) 3 units + 5 Tens = (35 , 53 , 33 , 55)
- c) The number just before 80 is (81 , 70 , 79 , 89)
- d) $40 + \dots = 45$ (5 , 50 , 4 , 40)
- e) The greatest 2-different- digit number is (10 , 11 , 99 , 98)

Put < , = , > :

$23 + 56$ $34 + 45$
 $67 + 13$ Seventy

5 tens + 6 units 65
 $5 + 70$ 57

Arrange in a descending order :

56 , 79 , 34 , 21 , 50



Exercises 4

Word Problems



Complete :

The price of  and  = + = LE




The price of  and  = + = LE

The price of  and  = + = LE

The price of  and  = + = LE

The price of  and  = + = LE

The price of  and  = + = LE

The price of ,  and 
= + + = LE



Complete :

The price of  and  = + = LE




The price of  and  = + = LE

The price of  and  = + = LE

The price of  and  = + = LE

The price of  and  = + = LE

The price of ,  and  = + + = LE

The price of ,  and  = + + = LE

Alaa bought milk for L.E. 17 and candies for L.E. 6 .

How much money did Alaa pay ?

Alaa paid = + = L.E.

Omar bought crayons for L.E. 12 and a book for L.E. 25 .

How much money did Omar pay ?

Omar paid = + = L.E.

Eman bought a hat for L.E. 17 and a toy for L.E. 33 .

How much money did Eman pay ?

Omar paid = + = L.E.

Hana bought a ruler for L.E. 17 and a pencil for L.E. 6 .

How much money did Hana pay ?

Omar paid = + = L.E.

Adham bought a notebook for L.E. 15 , a pen for L.E. 6
and a pencil for LE 13 .

How much money did Adham pay ?

Adham paid = + + = L.E.

Sara has 55 pens and Mona has 17 pens

How many pens do Sara and Mona have ?

Sara and Mona have = + = pens

Alaa has LE 49 and Nada has LE 25

How much money do they have together ?

They have = + = L.E.

Ali has 33 balloons and Fady has 8 balloons .

How many balloons do they have ?

They have = + = balloons .

Sameh has 13 books , Ayman has 17 books and

Eman has 18 books How many books do they have ?

They have = + + = books

Salah has LE 7 , his father give him LE 19. and his mother give him LE 31

How much money does Salah have ?

Salah has = + + = LE

Alaa had L.E. 88 she bought candies for L.E. 12

Find the remaining money with Alaa

the remainder = - = L.E.

Sara had L.E. 27 she bought a pen for L.E. 5.

Find the remaining money with Sara .

the remainder = - = L.E.

Hanaa had L.E. 77 she bought a toy for L.E. 15

Find the remaining money with Hanaa

the remainder = - = L.E.

Nada had L.E. 15 she bought a book for L.E. 10 .

Find the remaining money with Nada .

the remainder = - = L.E.

Sama has 17 apples she eats 2 apples

How many apples are remain ?

the remainder = - = apples

Samir has 25 sweets . He eats 12 sweets .

How many sweets are remain ?

the remainder = - = sweets

Omar had L.E. 64. he bought a pen for L.E. 13 .
and a book for L.E. 11

Find the remaining money with Omar .

Omar paid = + = L.E.

the remainder = - = L.E.

Ahmed had L.E. 93 . he bought candies for L.E. 13 .
and a pencil for L.E. 17

Find the remaining money with Ahmed .

Ahmed paid = + = L.E.

The remainder = - = L.E.

Adam had L.E. 35 . he bought a toy for L.E. 15
and a ruler for L.E. 20 .

Find the remaining money with Adam .

Adam paid = + = L.E.

The remainder = - = L.E.

Fatma had L.E. 29 . he bought a  and 

Find the remaining money with Fatma

Fatma paid = + = L.E.

The remainder = - = L.E.



General exercises on unit 2

Find the result

$$\begin{array}{r} 45 \\ + 17 \\ \hline \end{array}$$

.....

$$\begin{array}{r} 67 \\ + 18 \\ \hline \end{array}$$

.....

$$\begin{array}{r} 84 \\ + 9 \\ \hline \end{array}$$

.....

$$\begin{array}{r} 24 \\ + 22 \\ \hline \end{array}$$

.....

$$\begin{array}{r} 37 \\ + 26 \\ \hline \end{array}$$

.....

$$\begin{array}{r} 43 \\ + 13 \\ + 42 \\ \hline \end{array}$$

.....

$$\begin{array}{r} 41 \\ + 11 \\ + 35 \\ \hline \end{array}$$

.....

$$\begin{array}{r} 15 \\ + 37 \\ + 47 \\ \hline \end{array}$$

.....

$$\begin{array}{r} 14 \\ + 7 \\ + 56 \\ \hline \end{array}$$

.....

$$\begin{array}{r} 62 \\ - 51 \\ \hline \end{array}$$

.....

$$\begin{array}{r} 43 \\ - 21 \\ \hline \end{array}$$

.....

$$\begin{array}{r} 32 \\ - 11 \\ \hline \end{array}$$

.....

$$\begin{array}{r} 89 \\ - 67 \\ \hline \end{array}$$

.....

Find the result

$$27 + 5 = \dots\dots\dots$$

$$56 + 7 = \dots\dots\dots$$

$$47 + 29 = \dots\dots\dots$$

$$37 + 57 = \dots\dots\dots$$

$$36 + 19 + 39 = \dots\dots\dots$$

$$19 + 38 + 3 = \dots\dots\dots$$

$$69 - 5 = \dots\dots\dots$$

$$37 - 4 = \dots\dots\dots$$

$$38 - 37 = \dots\dots\dots$$

$$45 - 45 = \dots\dots\dots$$

Complete using (< , = or >)

$45 + 35 \square 70$

$45 - 22 \square 2\text{tens} + 3\text{units}$

$78 - 43 \square 35$

$64 + 28 \square 36 - 24$

$72 \square 35 + 27$

$26 + 26 \square 4\text{tens} + 2\text{units}$

$78 \square 79 - 0$

$34 + 34 \square 43 + 43$

Complete

$56 + 22 < \square$

$\square < 68 - 67$

$\square < 36 + 63$

$\square = 78 - 45$

$56 + 22 = \square$

$48 - 34 < \square$

Match:

$23 + 36$

$48 + 22$

$18 + 17$

$42 + 38$










$90 - 20$


$89 - 30$

$97 - 17$


$68 - 33$

Complete : The price of


	and		=	+	=	LE				
	and		=	+	=	LE				
	and		=	+	=	LE				
	and		and		=	+	+	=	LE



LE 37



LE 12



LE 26

Alaa bought milk for L.E. 17 and candies for L.E. 6 .

How much money did Alaa pay ?

Alaa paid = + = L.E.

Adham bought a notebook for L.E. 15 , a pen for L.E. 6 and a pencil for LE 13 .

How much money did Adham pay ?

Adham paid = + + = L.E.

Hanaa had L.E. 77 she bought a toy for L.E. 15

Find the remaining money with Hanaa

the remainder = - = L.E.

Nada had L.E. 15 she bought a book for L.E. 10 .

Find the remaining money with Nada .

the remainder = - = L.E.

Adam had L.E. 35 . he bought a toy for L.E. 15
and a ruler for L.E. 20 .

Find the remaining money with Adam .

Adam paid = + = L.E.

The remainder = - = L.E.

Fatma had L.E. 29 . he bought a  and 

Find the remaining money with Fatma

Fatma paid = + = L.E.

The remainder = - = L.E.



Complete :

a) The smallest 2-different- digit number is

b) The greatest 2-different- digit number is

c) 5 units + 3 Tens =

d) Tens + Units = 74

e) 73 , 72 , 71 , , ,

f) 23 , 24 , 25 , , ,

g) The place-value of 3 in 83 is

h) The value of 4 in 49 is

i) The number just after 38 is

j) The number just before 70 is.

k) 40 + = 48

unit 3



Geometry and Measurement



Exercises 1

The Length الطول

Arrange the following children according to their height :


The tallest

.....

.....

.....

The shortest



Arrange the following children according to their height :

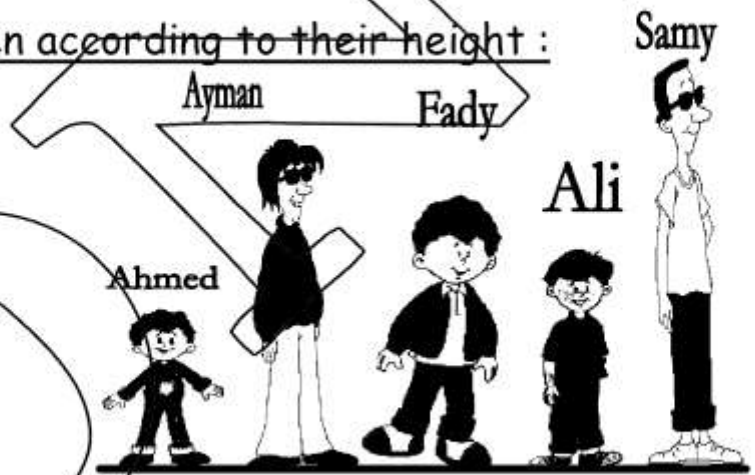
The tallest

.....

.....

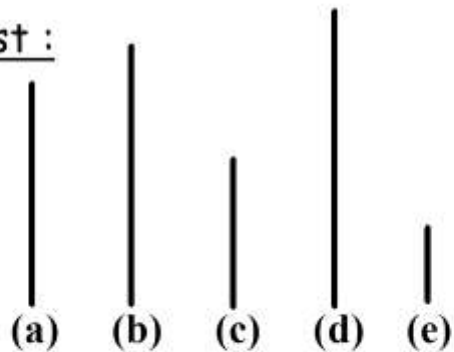
.....

The shortest



Order from the shortest to the longest :

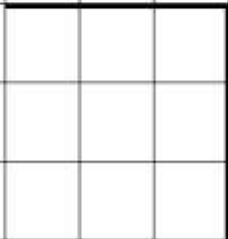
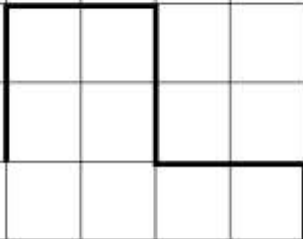
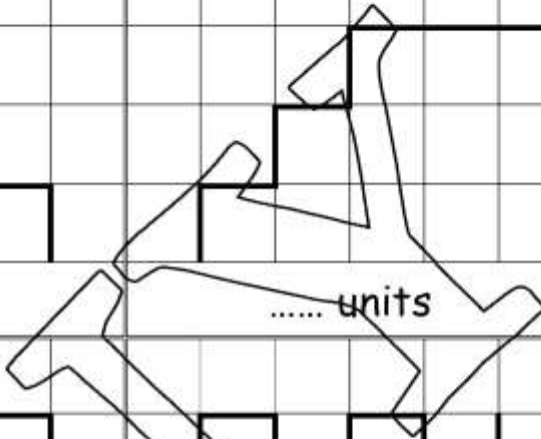
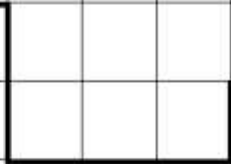


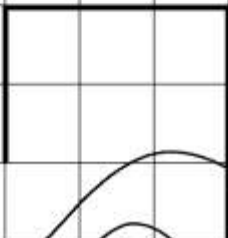
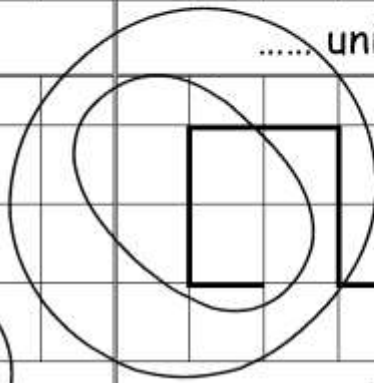

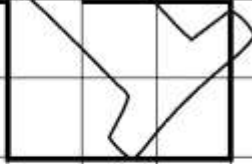
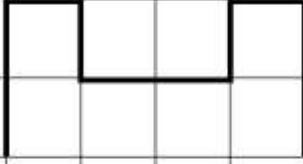
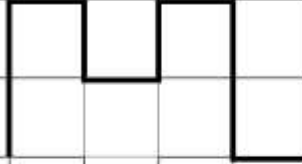
- (a) _____
- (b) _____
- (c) _____
- (d) _____
- (e) _____



--	--	--	--	--

--	--	--	--	--

Consider the length of the small square a unit of measuring the length .Write the measure of each line under it :

		
..... units units units
		
..... units units units
		
..... units units units
		
..... units units units

Find the result :

$75 + 15 = \dots\dots\dots$

$97 - 37 = \dots\dots\dots$

$24 + 32 + 15 = \dots\dots\dots$

$$\begin{array}{r} 56 \\ + 28 \\ \hline \end{array}$$

$$\begin{array}{r} 75 \\ + 8 \\ \hline \end{array}$$

$$\begin{array}{r} 27 \\ - 15 \\ \hline \end{array}$$

Complete :

- a) The greatest 2-digit in the number is
- b) The place - value of 8 in 83 is
- c) The number just after 24 is
- d) Tens + units = 75
- e) The smallest number formed from 7 and 9 is

Choose the correct answer:

- a) The value of 7 in 37 is (7 , 70 , 30 , 3)
- b) The number just before 73 is (72 , 74 , 77 , 33)
- c) 4 Units + 7 Tens = (47 , 74 , 44 , 55)
- d) The smallest 2-digit number is (10 , 11 , 99 , 98)

Put < , = or > :

- a) $34 + 25$ $89 - 40$ b) $28 - 14$ 1 unit + 4 tens
- c) eighty five $50 + 8$ d) $40 + 20$ $40 + 2$

Arrange in an ascending order :

45 , 29 , 97 , 17 , 32

Eman bought a book for LE 15 and a pen for LE 35 .

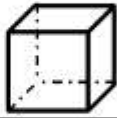
How much money did she pay ?

She paid = + = LE

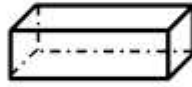


Exercises 2

Solids المجسمات



Cube



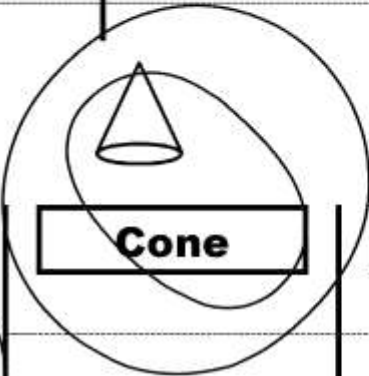
Cuboid



Pyramid



Cylinder



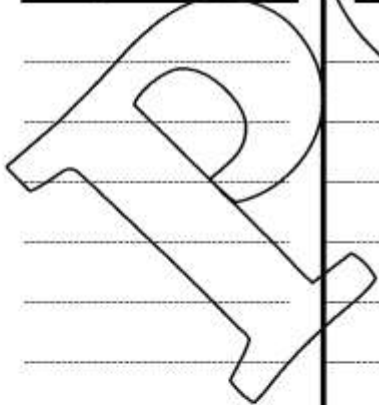
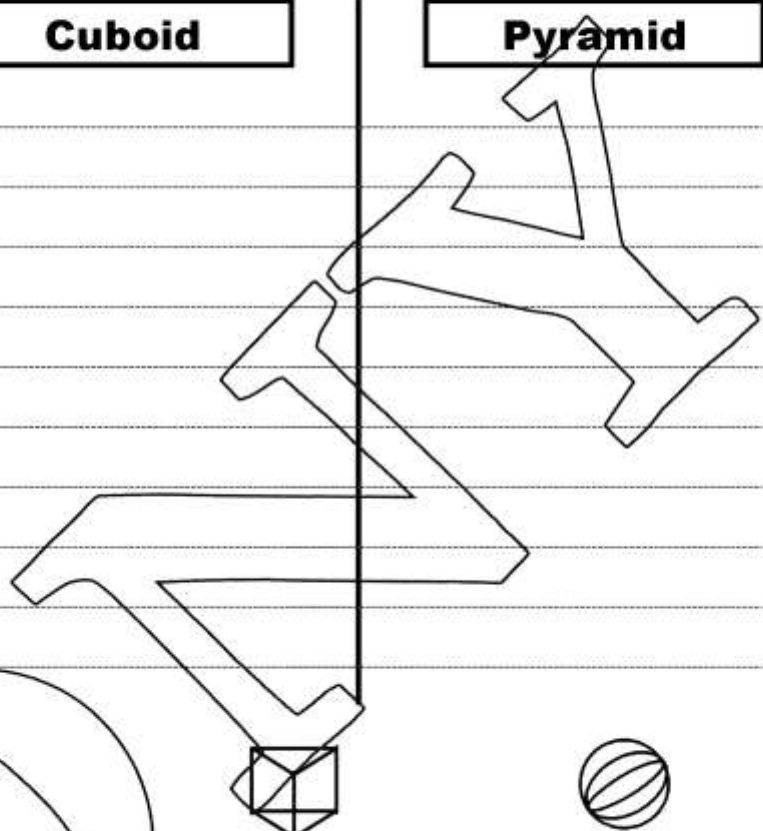
Cone



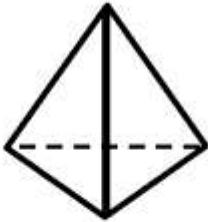
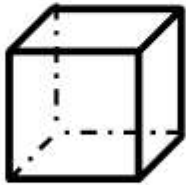
Prism



Sphere



Match each solid to its name



Cube

Cuboid

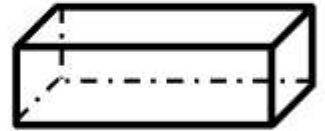
pyramid

Cylinder

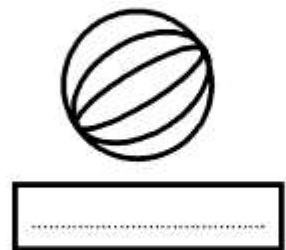
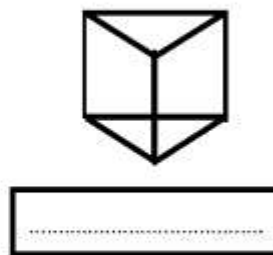
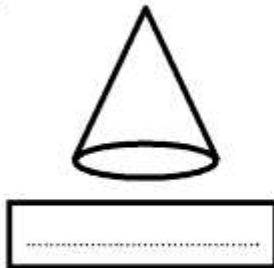
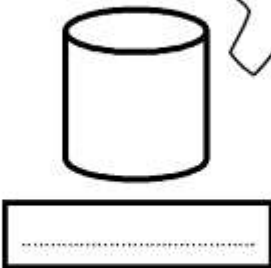
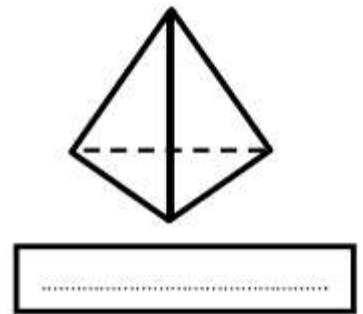

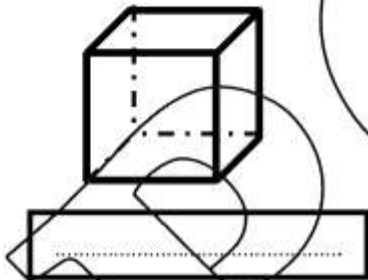
Cone

Prism


sphere



Write the name of each :



Shaps الأشكال



Rectangle

.....

.....

.....

.....

.....

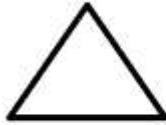
.....

.....

.....

.....

.....



Triangle

.....

.....

.....

.....

.....


.....

.....

.....

.....

.....



Square

.....

.....

.....

.....

.....


.....

.....

.....

.....

.....



Circle

.....

.....

.....

.....

.....


.....

.....

.....

.....

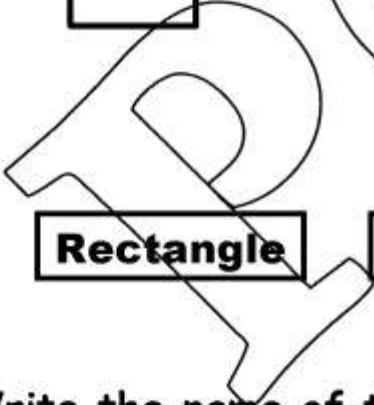
.....



Match each shape to its name



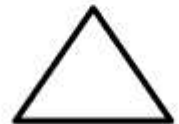
Rectangle



Triangle




Square



Circle


Write the name of the shape



.....



.....

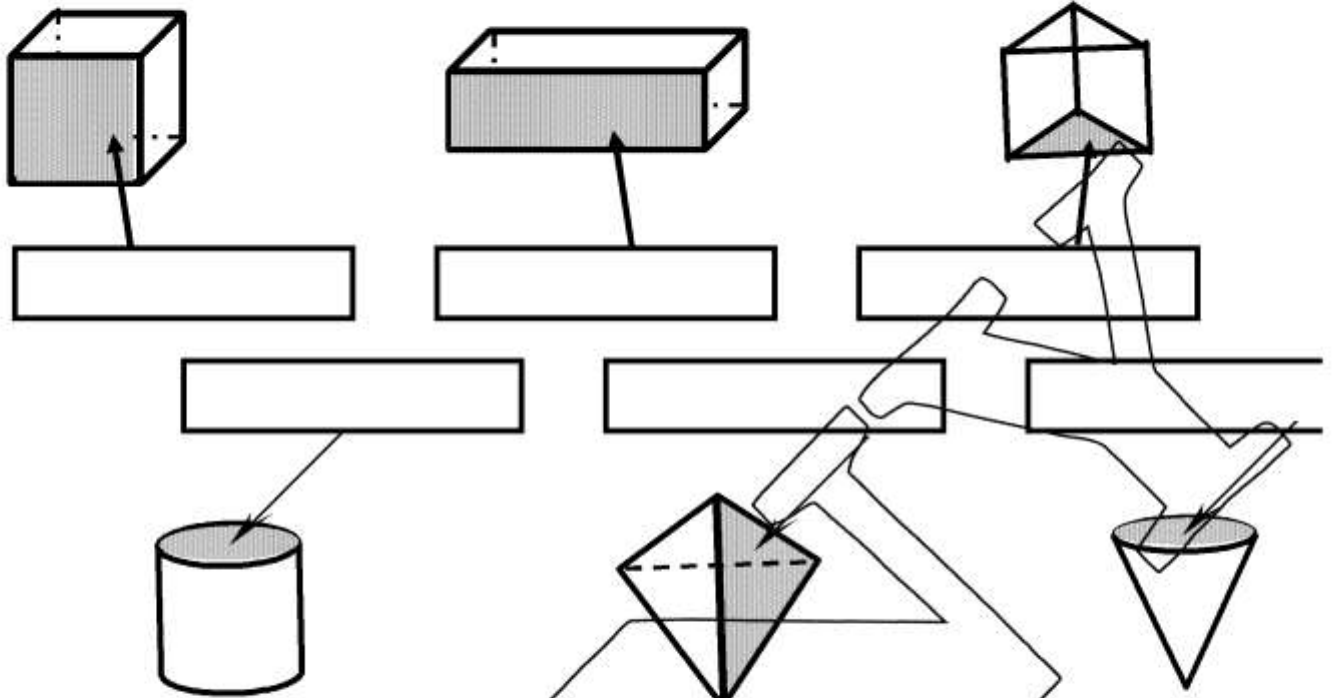


.....

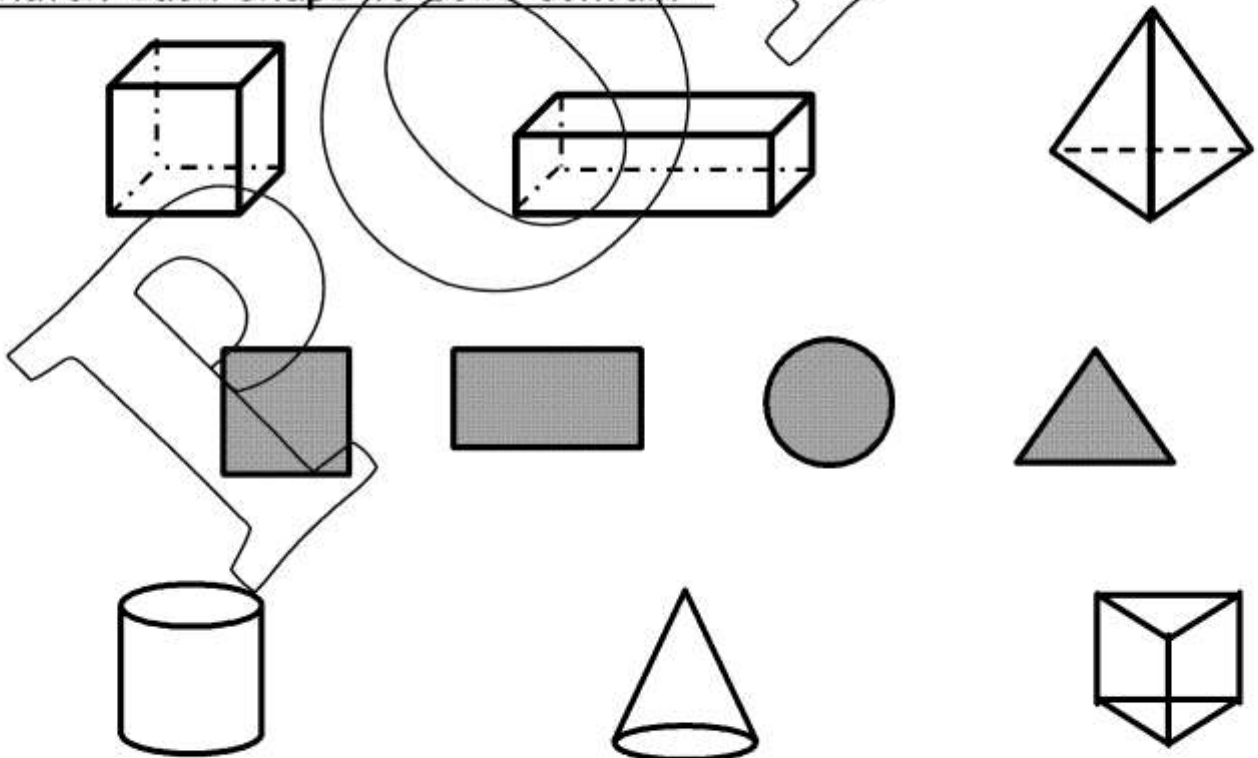


.....

Write the name of the shape the arrow points to :



Match each shape to solid contain :



Find the result :

$68 + 12 = \dots\dots\dots$

$87 - 34 = \dots\dots\dots$

$28 + 38 + 18 = \dots\dots\dots$

$$\begin{array}{r} 73 \\ + 18 \\ \hline \end{array}$$

$$\begin{array}{r} 89 \\ + 5 \\ \hline \end{array}$$

$$\begin{array}{r} 73 \\ - 52 \\ \hline \end{array}$$

Complete :

- a) The greatest 2- different - digit in the number is
- b) The place - value of 5 in 45 is
- c) The number just after 89 is
- d)Tens +units = 63
- e) The greatest number formed from 7 and 1 is

Choose the correct answer:

- a) The value of 3 in 37 is (7 , 70 , 30 , 3)
- b) The number just before 50 is (51 , 40 , 49 , 59)
- c) 7 Units + 4 Tens = (47 , 74 , 44 , 55)
- d) The smallest 2- same - digit number is (10 , 11 , 99 , 98)

Put < , = or > .

- a) $54 + 26$ $87 - 10$ b) $28 - 14$ 1 unit + 4 tens
- c) eighty five $50 + 8$ d) $40 + 20$ $40 + 2$

Arrange in an ascending order :

72 , 61 , 80 , 29 , 61

..... , , ,

Ahmed had LE 78 , He bought a book for LE 45 .

Find the remaining money with him .

The remainder = - = LE



Exercises 3

Fractions الكسور

ف نصف

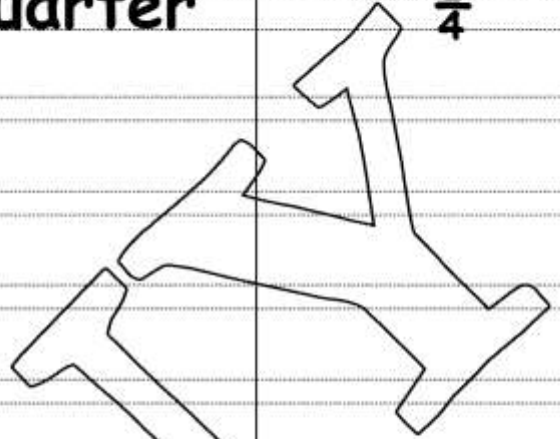
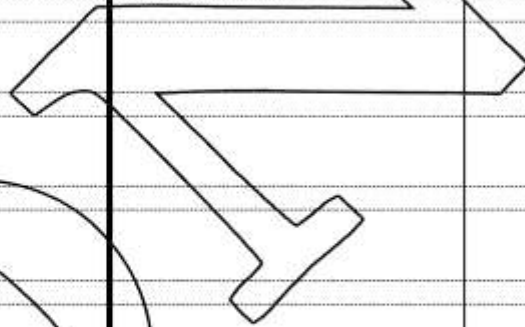
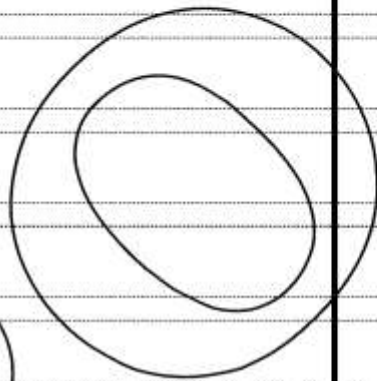
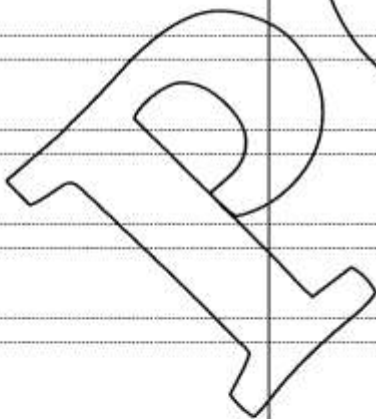
Half

$\frac{1}{2}$

ع ربع

quarter

$\frac{1}{4}$



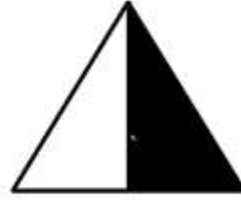
Write $\frac{1}{2}$ $\frac{1}{4}$ or $\frac{1}{3}$ under the figure :



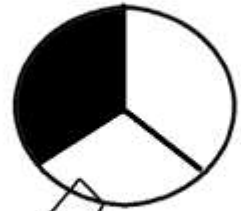
.....




.....




.....



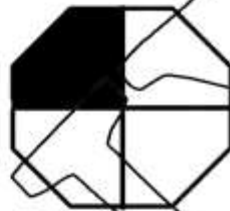
.....



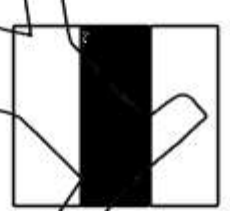
.....



.....



.....



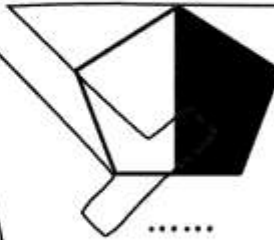
.....



.....



.....



.....




.....



.....



.....



.....




.....



.....



.....

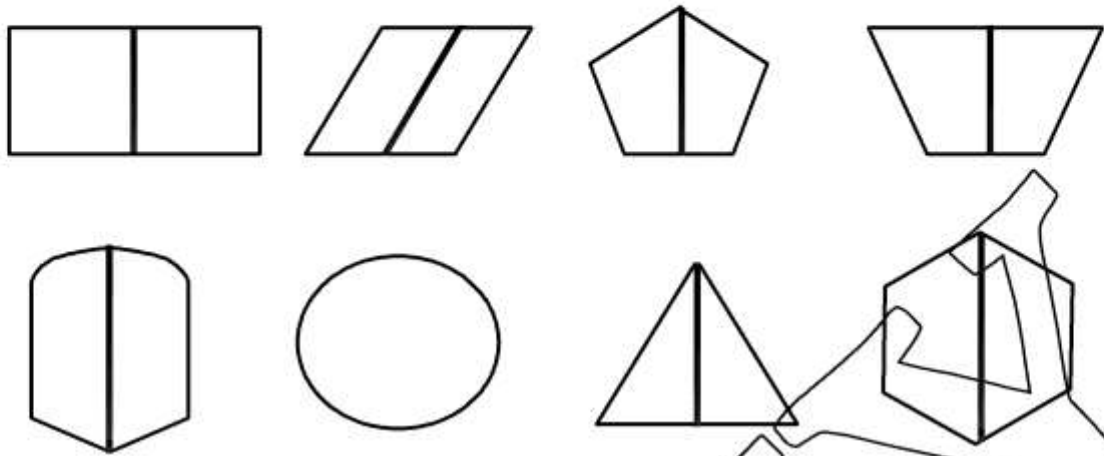


.....

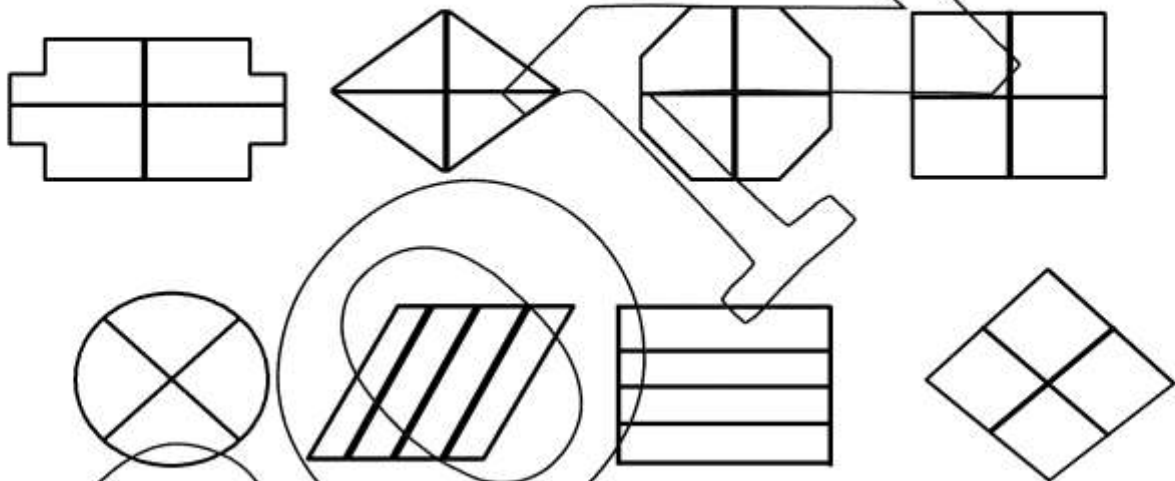


.....

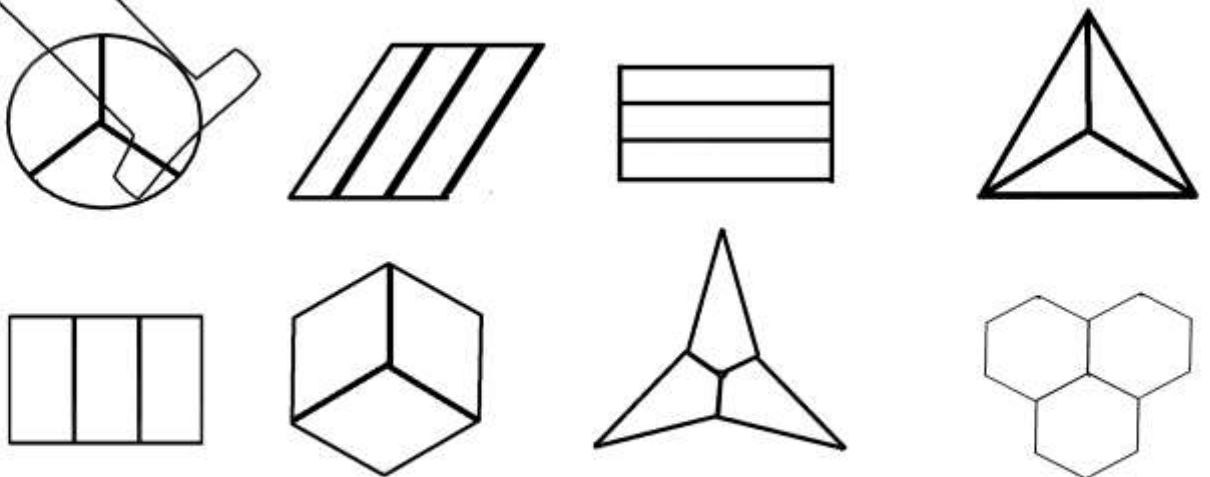
Colour $\frac{1}{2}$ of each of the following :



Colour $\frac{1}{4}$ of each of the following :



Colour $\frac{1}{4}$ of each of the following :



Find the result :

$27 + 13 = \dots\dots\dots$

$79 - 37 = \dots\dots\dots$

$28 + 3 + 11 = \dots\dots\dots$

$$\begin{array}{r} 56 \\ + 28 \\ \hline \end{array}$$

$$\begin{array}{r} 25 \\ + 28 \\ \hline \end{array}$$

$$\begin{array}{r} 58 \\ - 15 \\ \hline \end{array}$$

Complete :

- a) The smallest 2-digit in the number is
- b) The place - value of 4 in 24 is
- c) The number just after 75 is
- d) Tens + units = 47.
- e) The greatest number formed from 0 and 9 is

Choose the correct answer:

- a) The value of 3 in 37 is (7 , 70 , 30 , 3)
- b) The number just before 74 is (72 , 73 , 77 , 33)
- c) 7 Units + 4 Tens = (47 , 74 , 44 , 55)
- d) The greatest 2-digit number is (10 , 11 , 99 , 98)

Put < , = or > :

- a) $38 + 25$ $88 - 45$
- b) $28 - 24$ 1 unit + 4 tens
- c) eighty $50 + 30$
- d) $4 + 20$ $40 + 2$

Arrange in an ascending order :

55 , 9 , 92 , 13 , 39

Eman bought a book for LE 55 and a pen for LE 39

How much money did she pay ?

She paid = + = LE



Exercises 4

Telling the time

Write the time :



It's O'clock



It's O'clock



It's O'clock



It's O'clock



It's O'clock



It's O'clock



It's O'clock



It's O'clock



It's O'clock



It's O'clock

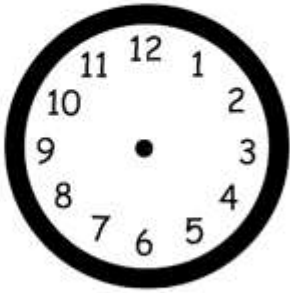


It's O'clock




It's O'clock


Draw the hands :



It's 2 O'clock



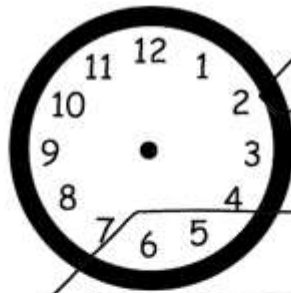
It's 4 O'clock



It's 6 O'clock




It's 8 O'clock




It's 10 O'clock




It's 12 O'clock



It's 1 O'clock




It's 3 O'clock




It's 5 O'clock



It's 7 O'clock



It's 9 O'clock



It's 11 O'clock

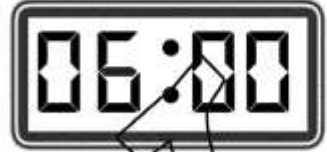
Write the time :



It's O'clock



It's O'clock



It's O'clock



It's O'clock



It's O'clock



It's O'clock



It's O'clock



It's O'clock



It's O'clock



It's O'clock

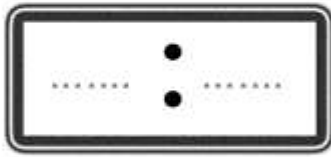


It's O'clock

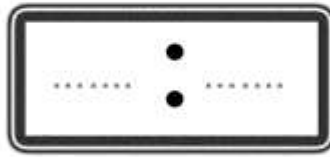


It's O'clock

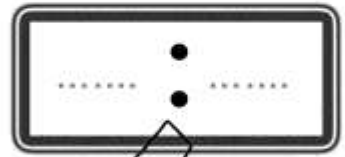
Complete:



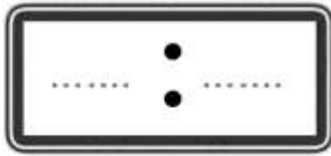
It's 2 O'clock



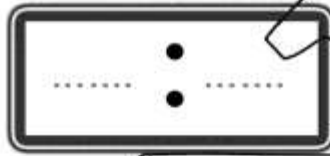
It's 4 O'clock



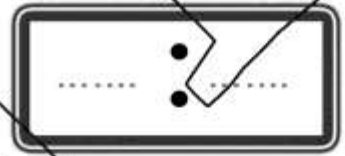
It's 6 O'clock



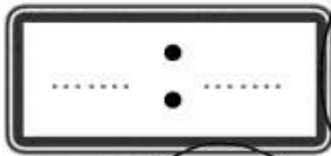
It's 8 O'clock



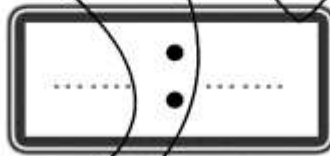
It's 10 O'clock



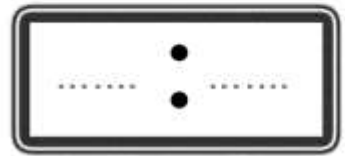
It's 12 O'clock



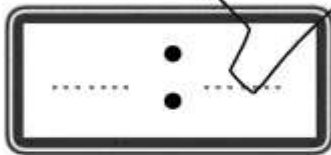
It's 1 O'clock



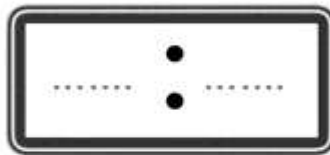
It's 3 O'clock




It's 5 O'clock



It's 7 O'clock



It's 9 O'clock



It's 11 O'clock

Find the result :

$45 + 29 = \dots\dots\dots$

$94 - 23 = \dots\dots\dots$

$15 + 15 + 15 = \dots\dots\dots$

$$\begin{array}{r} 47 \\ + 5 \\ \hline \dots\dots\dots \end{array}$$

$$\begin{array}{r} 28 \\ + 40 \\ \hline \dots\dots\dots \end{array}$$

$$\begin{array}{r} 96 \\ - 6 \\ \hline \dots\dots\dots \end{array}$$

Complete :

- a) The greatest 2- same - digit in the number is
- b) The place - value of 9 in 98 is
- c) The number just after 29 is
- d)units + Tens = 29
- e) The smallest number formed from 5 and 3 is

Choose the correct answer:

- a) The value of 5 in 35 is (5 , 50 , 30 , 3)
- b) The number just before 70 is (71 , 60 , 69 , 79)
- c) 4 Units + 2 Tens = (42 , 24 , 44 , 22)
- d) The greatest 2- different - digit number is (10 , 11 , 99 , 98)

Put < , = or > .

- a) $27 + 27$ $98 - 44$ b) $76 - 23$ 3 unit + 5 tens
- c) Sixty one $10 + 6$ d) $4 + 20$ $40 + 2$

Arrange in an ascending order :

45 , 28 , 89 , 37 , 64

Adam has LE 25 , Eman has LE 38 and Nada has LE 17.


How much money do they have ?

They have = + + = LE







Exercises 5



The Money




Write the amount of money :

	
..... + + + + + + + + + +
..... pounds pounds

	
..... + + + + + + + + + +
..... pounds pounds

	
..... + + + + + + + + + +
..... pounds pounds




Write the amount of money :



..... + + + +

..... pounds



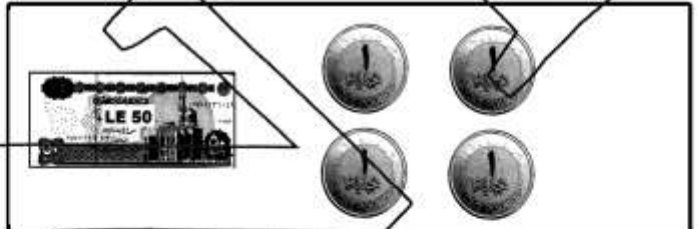
..... + + + +

..... pounds



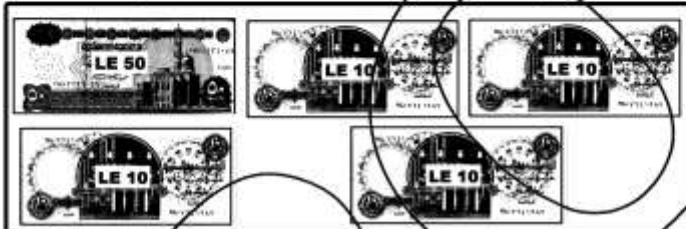
..... + + + + +

..... pounds




..... + + + +

..... pounds



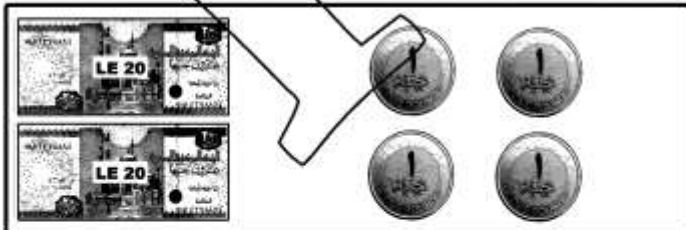
..... + + + +

..... pounds



..... + + + +

..... pounds



..... + + + + +

..... pounds



..... + + + +

..... pounds

Draw the money :

LE 50 LE 10

LEI LEI

62 Pounds

53 Pounds

45 Pounds

12 Pounds

73 Pounds

32 Pounds

14 Pounds

53 Pounds

66 Pounds

73 Pounds

53 Pounds

60 Pounds

Match:

23 + 36

48 + 22

18 + 17

42 + 38

90 - 20

89 - 30

97 - 17

68 - 33

Complete :

- a) The smallest 2-digit in the number is
- b) The place - value of 4 in 24 is
- c) The number just after 75 is
- d) Tens + units = 47.
- e) The greatest number formed from 0 and 9 is

Choose the correct answer:

- a) The value of 3 in 37 is (7 , 70 , 30 , 3)
- b) The number just before 74 is (72 , 73 , 77 , 33)
- c) 7 Units + 4 Tens = (47 , 74 , 44 , 55)
- d) The greatest 2-digit number is (10 , 11 , 99 , 98)

Put < , = or > :

- a) $54 + 26$ $87 - 10$ b) $28 - 14$ 1 unit + 4 tens
- c) eighty five $50 + 8$ d) $40 + 20$ $40 + 2$

Arrange in an ascending order :

72 , 61 , 80 , 29 , 61

..... , , , ,

Ahmed had LE 78 , He bought a book for LE 45 .

Find the remaining money with him .

The remainder = - = LE



Exercises 6

Relative Positions

أمام

In front of

خلف


behind

على

on

تحت

under




Complete :



- How many girls are there in front of Adel?
- How many girls are there behind Adel?


Put (✓) or (x):

- 1- Nadia stands behind Farida. []
- 2- Farida stands in front of Sally. []
- 3- Farah stands behind Rasha. []
- 4- In front of Rasha, there are 4 girls. []
- 5- Behind Farida, there are three girls. []

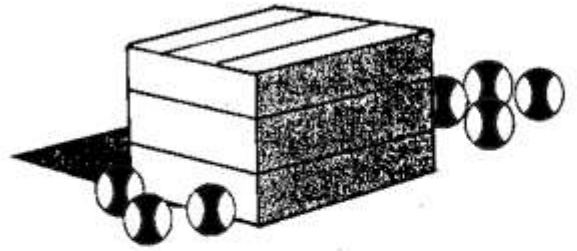


Complete with "behind" or "in front of":

- 1- The elephant is the tree.
- 2- The tree is the lion.
- 3- The tree is the elephant.

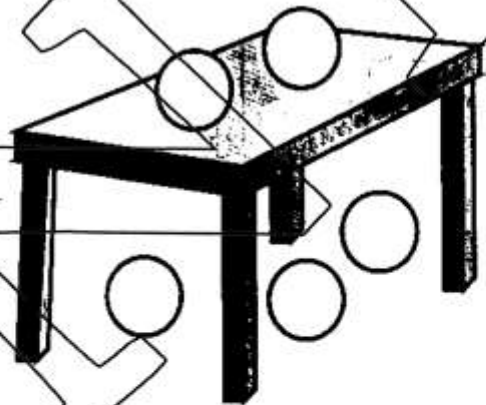
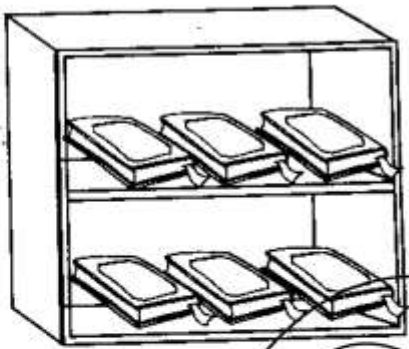


Look at the picture and answer :



1- How many balls are there behind the box? _____ balls.


2- How many balls are there in front of the box? _____ balls.



Colour the books under the shelf Colour the balls on the table .

Notice the opposite figure, then complete using (on or under):

- a) The vase is the television.
- b) The television is the table.
- c) The pair of shoes is the table.
- d) The vase is the TV.
- e) The table is the TV.



Find the result :

$75 + 15 = \dots\dots\dots$

$97 - 37 = \dots\dots\dots$

$24 + 32 + 15 = \dots\dots\dots$

$$\begin{array}{r} 56 \\ + 28 \\ \hline \end{array}$$

$$\begin{array}{r} 75 \\ + 8 \\ \hline \end{array}$$

$$\begin{array}{r} 27 \\ - 15 \\ \hline \end{array}$$

Complete :

- a) The greatest 2-digit in the number is
- b) The place - value of 8 in 83 is
- c) The number just after 24 is
- d) Tens + units = 75
- e) The smallest number formed from 7 and 9 is

Choose the correct answer:

- a) The value of 7 in 37 is (7 , 70 , 30 , 3)
- b) The number just before 73 is (72 , 74 , 77 , 33)
- c) 4 Units + 7 Tens = (47 , 74 , 44 , 55)
- d) The smallest 2-digit number is (10 , 11 , 99 , 98)

Arrange in a descending order :

45 , 29 , 97 , 17 , 32

..... , , , ,

Write the order of the circled picture :

										<input type="text"/>
										<input type="text"/>
										<input type="text"/>

يمين

Right

يسار

Left

بين

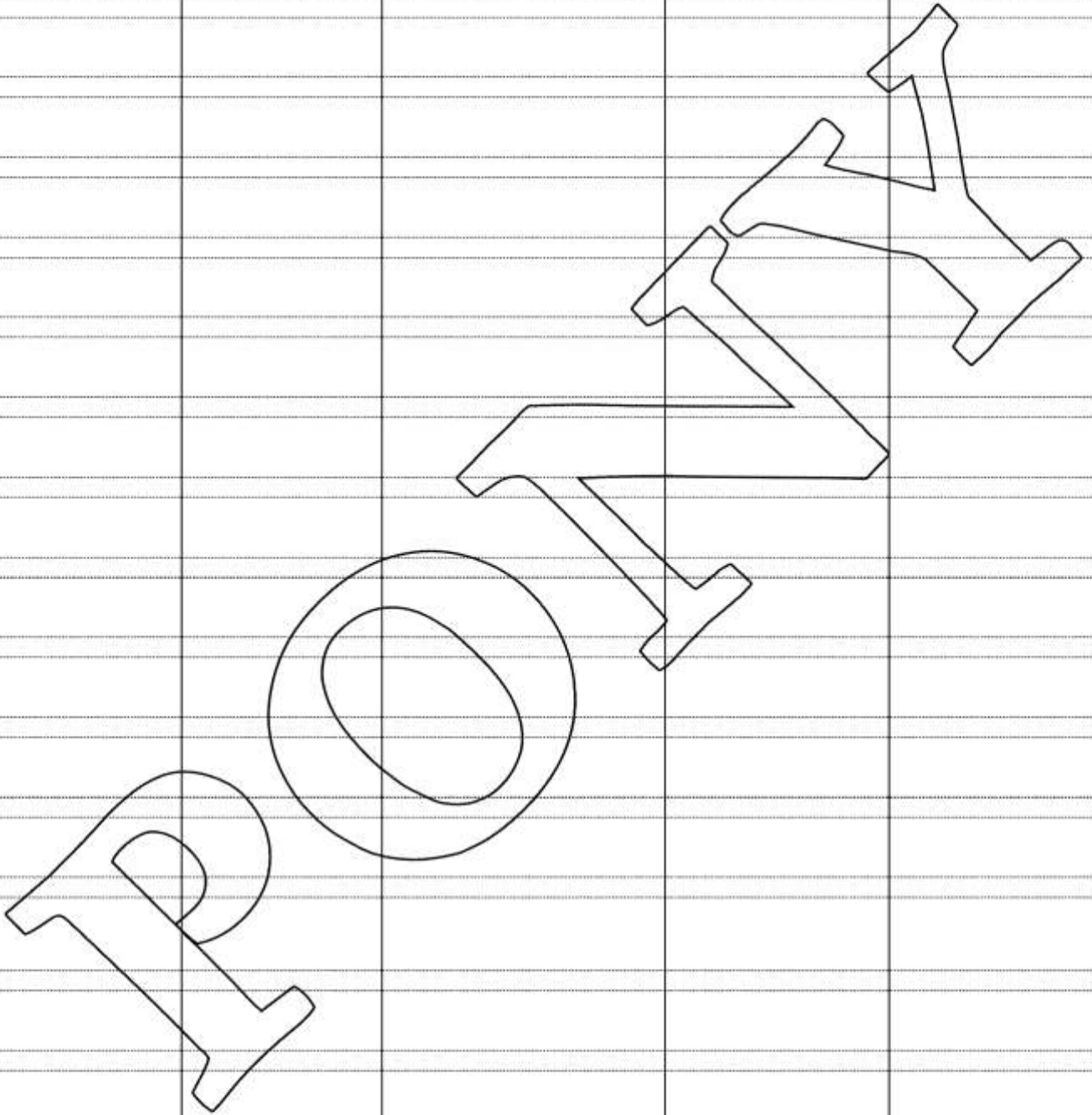
Between

داخل

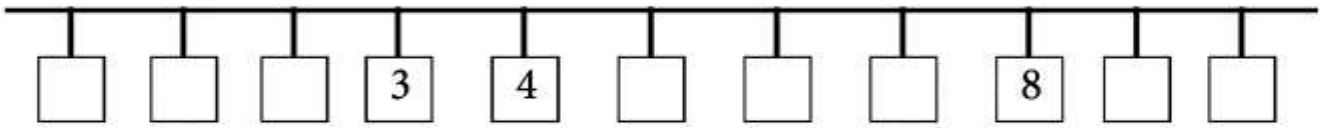
inside

خارج

outside



Complete the numbers to the left of the number 8 :



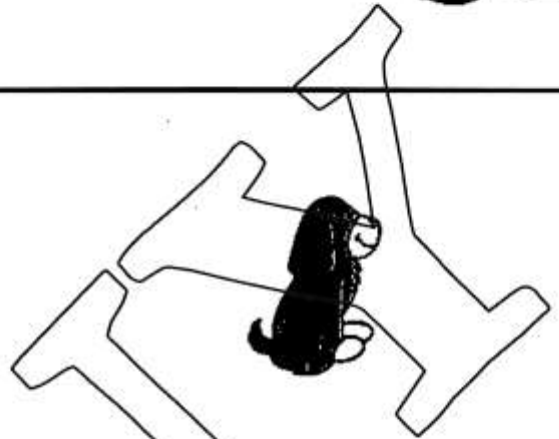
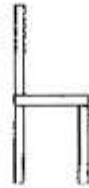
- The number just to the right of the numbers 3 is the number
- The number just to the right of the numbers 5 is the number
- The number just to the right of the numbers 7 is the number
- The number just to the left of the numbers 5 is the number
- The number just to the left of the numbers 3 is the number
- The number just to the left of the numbers 4 is the number
- The number which is between 3 and 5 is
- The number which is between 5 and 7 is
- The number which is between 0 and 2 is
- The number which is between 4 and 6 is
- The number which is to the right of 9 is
- The number which is to the left of 9 is
- The number which is to the right of 1 is
- The number which is to the left of 1 is
- The number which is to the right of 4 is
- The number which is to the left of 4 is

Complete using the words: [in front of - inside - outside - between]

- a) The ball lies the bowl.
- b) The cat lies the bowl.



Choose the correct answers:




- a) The cat lies the chair.

[in front of - behind - at the top of]


- b) The dog lies the chair.


[in front of - behind - at the top of]

Colour the cars under the bridge :



- Colour the children inside the car





- There are birds outside the cage.

- There are birds inside the cage.



Colour the birds
inside the cage

- Colour the chair in front of Tamer in red.
- Colour the chair behind Tamer in blue.



Find the result :

$75 + 15 = \dots\dots\dots$

$97 - 37 = \dots\dots\dots$

$24 + 32 + 15 = \dots\dots\dots$

$$\begin{array}{r} 56 \\ + 28 \\ \hline \end{array}$$

$$\begin{array}{r} 75 \\ + 8 \\ \hline \end{array}$$

$$\begin{array}{r} 27 \\ - 15 \\ \hline \end{array}$$

Complete :

- a) The greatest 2- different - digit in the number is
- b) The value of 3 in 37 is
- c) The number just after 89 is
- d) 7 Units + 4 Tens =
- e) The greatest number formed from 7 and 1 is

Arrange in an ascending order :

45 , 29 , 97 , 17 , 32

..... ,,,,

Eman bought a book for LE 15 and a pen for LE 35 .

How much money did she pay ?

She paid = + = LE

Circle according to the order :

	Seventh
	First
	Ninth
	FiFth

General Exercises

Arrange the following children according to their height :

The tallest

Ayman

Fady


Samy

.....

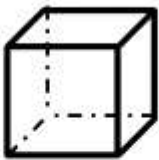
.....

.....

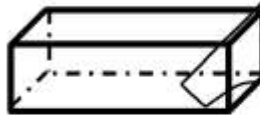
The shortest



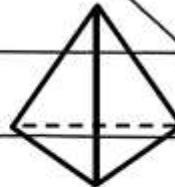
Write the name of each :



.....



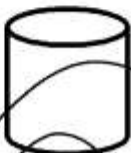
.....



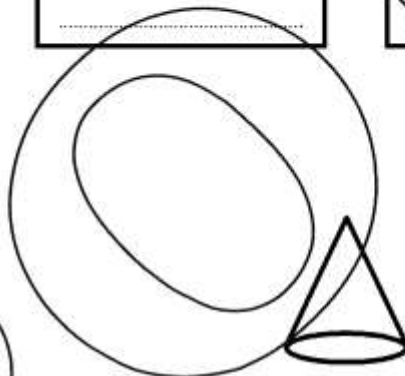
.....



.....



.....



.....




.....



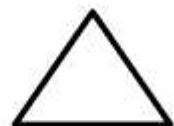
.....



.....




.....



.....

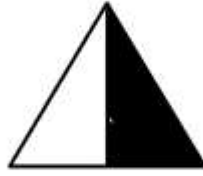
Write $\frac{1}{2}$ $\frac{1}{4}$ or $\frac{1}{3}$ under the figure :




.....



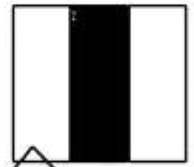
.....



.....



.....



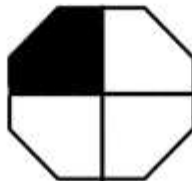
.....



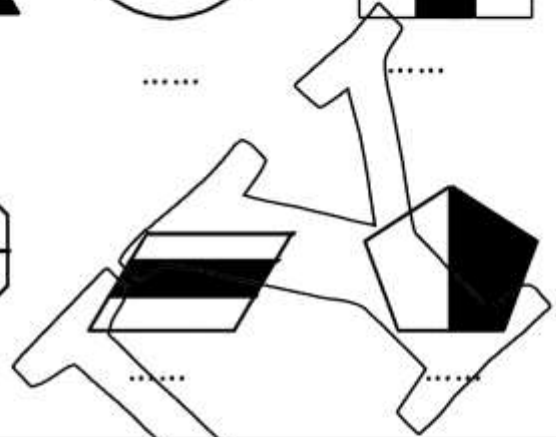
.....



.....



.....



Write the time :



It's O'clock



It's O'clock



It's O'clock


Draw the hands :



It's 2 O'clock



It's 4 O'clock



It's 6 O'clock

Write the time :



It's O'clock

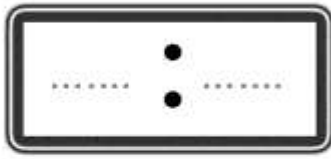


It's O'clock

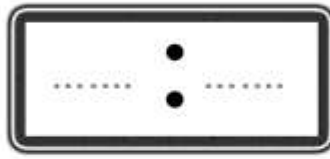


It's O'clock

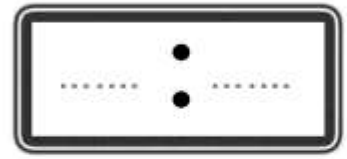
Complete:



It's 2 O'clock



It's 4 O'clock



It's 6 O'clock

Write the amount of money :

..... + + + + +

..... pounds

..... + + + + +

..... pounds

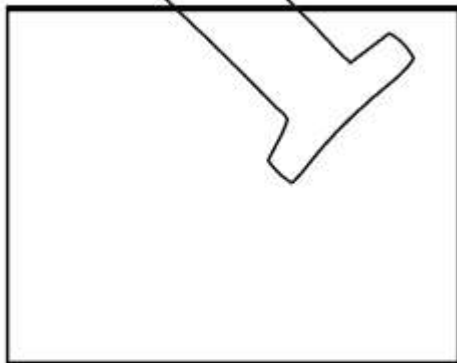
..... + + + + +

..... pounds

..... + + + + +

..... pounds


Draw the money :



62 Pounds



53 Pounds



45 Pounds


Notice the opposite figure, then complete using (on or under):

- a) The vase is the television.
- b) The television is the table.
- c) The pair of shoes is the table.
- d) The vase is the TV.
- e) The table is the TV.



- There are birds outside the cage.

- There are birds inside the cage.




Complete with "behind" or "in front of":

1- The elephant is the tree.

2- The tree is the lion.

3- The tree is the elephant.



■ The number which is between 4 and 6 is

■ The number which is to the right of 9 is

■ The number which is to the left of 9 is

Find the result :

$38 + 38 = \dots\dots\dots$

$83 - 12 = \dots\dots\dots$

$19 + 9 + 24 = \dots\dots\dots$

$$\begin{array}{r} 58 \\ + 6 \\ \hline \dots\dots\dots \end{array}$$

$$\begin{array}{r} 18 \\ + 26 \\ \hline \dots\dots\dots \end{array}$$

$$\begin{array}{r} 78 \\ - 5 \\ \hline \dots\dots\dots \end{array}$$

Choose the correct answer:

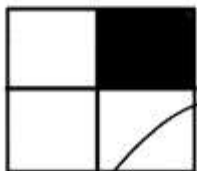
- a) The value of 3 in 62 is (2 , 20 , 60 , 6)
- b) The number just after 79 is (70 , 80 , 78 , 89)
- c) 4 Units + 7 Tens = (47 , 74 , 44 , 77)
- d) The greatest 2 - digit number is (10 , 11 , 98 , 99)

Arrange in a descending order :

35 , 72 , 19 , 51 , 90

..... , , , ,

Write $\frac{1}{2}$ $\frac{1}{4}$ or $\frac{1}{3}$ under the figure :



.....




.....



.....



.....



.....

Circle according to the order :



First

Ninth

FiFth

Sheet (1)

Add :

$7 + 3 = \underline{\quad}$

$4 + 4 = \underline{\quad}$

$2 + 0 = \underline{\quad}$

$3 + 2 = \underline{\quad}$

$$\begin{array}{r} 8 \\ + 5 \\ \hline \end{array}$$

$$\begin{array}{r} 4 \\ + 2 \\ \hline \end{array}$$

$$\begin{array}{r} 10 \\ + 0 \\ \hline \end{array}$$

Subtract :

$9 - 5 = \underline{\quad}$

$8 - 8 = \underline{\quad}$

$7 - 7 = \underline{\quad}$

$10 - 7 = \underline{\quad}$

$$\begin{array}{r} 7 \\ - 1 \\ \hline \end{array}$$

$$\begin{array}{r} 10 \\ - 3 \\ \hline \end{array}$$

$$\begin{array}{r} 8 \\ - 6 \\ \hline \end{array}$$

Complete using < , = or >)

Complete :

3 5

2 + 5 8 + 2

3 >

5 + 1 <

7 nine

6 + 3 2 + 6

three =

2 - 2 =

two 5

7 - 6 8 - 7

3 <

> 9 - 6

Put the following numbers in :

ascending order

descending order

2 , 7 , 1 , 6

4 , 0 , 8 , 2

..... , , ,

..... , , ,

Complete :

The number just **after** 6 is _____The number just **before** 6 is _____The number **between** 5 and 7 is _____

Alaa bought a book for LE 6 and a toy for LE 3 .

How much money did she pay ?

She paid = _____ + _____ = LE _____

Nour had LE 9 . She bought a book for LE 7 .

Find the remaining money with her .

The remainder = _____ - _____ = LE _____

Sheet (2)

Complete :

$\square + 0 = 10$

$\square + 1 = 10$

$2 + \square = 10$

$\square + 3 = 10$

$4 + \square = 10$

$\square + 5 = 10$

$6 + \square = 10$

$7 + \square = 10$

$\square + 8 = 10$

$\square + 9 = 10$

$\square + 10 = 10$

$0 + \square = 10$

Write in words:

12 :

14 :

15 :

20 :

40 :

50 :

60 :

80 :

90 :

11 :

13 :

30 :

Write in digits :

Sixteen :

eighteen :

seventy :

nineteen :

Sixteen :

seventeen :

Put the suitable sign < , = or > :

20 \square 12

sixteen \square 60

15 \square 50

seventy \square 17

30 \square 13

eighteen \square 80

Complete :

$\square + 0 = 10$

$\square + 1 = 10$

$2 + \square = 10$

$4 + \square = 10$

$\square + 3 = 10$

$\square + 10 = 10$

$0 + \square = 10$

$7 + \square = 10$

$\square + 9 = 10$

$\square + 5 = 10$

$6 + \square = 10$

$8 + \square = 10$

Put the suitable sign $<$, $=$ or $>$:

20 \square 12

sixteen \square 60

30 \square 13

15 \square 50

seventy \square 17

eighteen \square 80

Write in words:

23 :

32 :

67 :

76 :

31 :

13 :

56 :

65 :

45 :

54 :

72 :

27 :

85 :

58 :

Write in digits :

Thirty five :

twenty four :

eighty six :

Seventy five :

forty one :

thirty eight :

fifty five :

forty four :

ninety six :

twenty five :

sixty one :

fifty eight :

seventy nine :


fifty two :

sixty nine :

Name : _____

PONY

Write the number :



$$\square \text{ tens} + \square \text{ units} = \square \square$$

.....



$$\square \text{ tens} + \square \text{ units} = \square \square$$

.....



$$\square \text{ tens} + \square \text{ units} = \square \square$$

.....



$$\square \text{ tens} + \square \text{ units} = \square \square$$

.....

Complete :

$$\square + 0 = 10$$

$$\square + 1 = 10$$

$$2 + \square = 10$$

$$4 + \square = 10$$

$$\square + 3 = 10$$

$$\square + 10 = 10$$

$$0 + \square = 10$$

$$7 + \square = 10$$

$$\square + 9 = 10$$

$$\square + 5 = 10$$

$$6 + \square = 10$$

$$8 + \square = 10$$

Write in words:

23 :

32 :

67 :

76 :

31 :

13 :

Write in digits :

Thirty five :

twenty four :

eighty six :

Seventy five :

forty one :

thirty eight :

fifty five :

forty four :

ninety six :

Complete :

1 tens + 0 units =

8 tens + 2 units =

3 tens + 4 units =

6 tens + 0 units =

4 tens + 6 units =

5 tens + 0 units =

4 units + 3 tens =

1 units + 1 tens =

9 units + 1 tens =

2 units + 6 tens =

1 units + 2 tens =

4 units + 4 tens =

37 = +

Forty eight = + =

29 = +

Thirty six = + =

74 = +

Sixty two = + =

Write in words:

23 :

32 :

67 :

76 :

31 :

13 :

Write in digits :

Thirty four :

twenty eight :

eighty four :

Seventy one :

forty five :

thirty five :

fifty five :

forty four :

ninety one :

Write the **place-value** of the digit **5** in each of the following:

- a** 75 is **d** 59 is
- b** 58 is **e** 65 is
- c** 5 is

2 Write the **value** of the digit **6** in each of the following:

- a** 68 is **d** 67 is
- b** 56 is **e** 26 is
- c** 60 is

3 Complete :

- a** 5 tens + 2 units = **d** tens + units = 73
- b** 7 units + 9 tens = **e** units + tens = 49
- c** 8 tens =

4 Complete :

- a** Thirty two = **d** Seventy five =
- b** Eighteen = **e** forty =
- c** Ninety one =

Complete : ((in words))

- a** 45 = **d** 57 :
- b** 32 = **e** 17 :
- c** 88 =

Complete :

- a** $60 + 8 =$ **d** $20 + 3 =$
- b** $50 + \dots = 58$ **e** $\dots + 9 = 39$
- c** forty six = + =

Write the **place-value** of the digit **6** in each of the following:

- a** 68 is **c** 67 is
- b** 56 is **d** 26 is

2 Write the **value** of the digit **5** in each of the following:

- a** 59 is **c** 65 is
- b** 56 is **d** 45 is

3 Complete :

- a** 9 tens + 5 units = **c** tens + units = 79
- b** 7 units + 2 tens = **d** units + tens = 42

4 Complete :

- a** Thirty five = **c** Seventy =
- b** Thirteen = **d** forty two =

Complete : ((in words))

- a** 25 = **c** 54 :
- b** 31 = **d** 11 :

Complete :

- a** $60 + 3 =$ **c** $20 + 9 =$
- b** $50 +$ $= 59$ **d** $+ 2 = 32$

The number Just after :

49 is

76 is

39 is

28 is

The number just before:

60 is

45 is

50 is

25 is

Name : _____

PONY

Write the **place-value** of the digit **7** in each of the following:

- a** 78 is **b** 57 is **c** 27 is

Write the **value** of the digit **5** in each of the following:

- a** 56 is **b** 45 is **c** 53 is

Complete :

a 4 tens + 9 units =

b 5 units + 7 tens =

c tens + units = 95

Complete :

a $60 + 7 = \dots\dots\dots$

b $20 + \dots\dots\dots = 29$

c $\dots\dots\dots + 2 = 92$

Complete :

a Thirty five =

b fifteen =

c Seventy two =

Complete : ((in words))

a 54:

b 32:

c 12:

The number Just **after** :

42 is

79 is

The number just **before** :

30 is

48 is

Put the suitable sign **<** , **=** or **>** :

59 95

Twenty - three 23

6 tens 16

Twenty-eight Eighty - nine

Fifty- six Sixty- five

Ninety - three 39

Arrange in an **ascending** order

82 , 52 , 91 , 36 , 46 , 59

 , , , , ,

Complete the following:

- a** 54 : ((in words))
- b** The value of 9 in 39 is
- c** $30 + 4 = \dots\dots$
- d** units + tens = 64
- e** The number just **before** 70 is

2 Choose the correct answer :

- a** twenty five = (20 or 50 or 52 or 25)
- b** The value of 7 in 76 is (7 , 70 , 70 , 77)
- c** $60 + 8 = \dots\dots$ (60 or 80 or 68 or 86)
- d** The number just **after** 54 is (55 , 53 , 44 , 50)
- e** 7 units + 2 tens = (72 , 27 , 22 , 77)

3 Complete using the suitable sign ((< , = or >)):

- a** 78 ninety seven
- b** 4 tens + 3 units 43
- c** 64 $60 + 4$
- d** $20 + 50$ 25
- e** 7 units + 5 ten $70 + 5$

4 Arrange in an ascending order : 47 , 23 , 98 , 54 , 59

, , , ,

Match:

thirty one

$70 + 8$

4 tens + 6 units

$20 + 30$

forty six

$90 - 40$

$30 + 1$

7 tens + 8 units

Choose the correct answer :

- a** The smallest 2-digit number is (10 , 11 , 99 , 98)
- b** The number just after 70 is (79 , 69 , 71 , 78)
- c** 8 units + 3 tens = (83 , 38 , 88 , 33)
- d** seventy four = (47 , 77 , 44 , 74)
- e** The value of 7 in 73 is (7 , 77 , 70 , 30)

2 Complete the following:

- a** 63 = tens + units
- b** The place value of 3 in 63 is
- c** 55 , 56 , 57 , 58 , ,
- d** 40 + 3 =
- e** The greatest 2- different - digit number is

3 Put < , = or > :

- a** 56 65
- b** 4 tens 40
- c** 5 units + 3 tens fifty three
- d** Thirty two 3 tens + 2 units
- e** 61 sixteen

4 Arrange in a descending order :

67 , 84 , 34 , 59 , 64

..... , , , ,

Arrange in an ascending order :

27 , 86 , 45 , 39 , 24

..... , , , ,

Choose the correct answer :

- a** The greatest 2-digit number is (10 , 11 , 99 , 98)
- b** The number just after 70 is (79 , 69 , 71 , 78)
- c** 3 units + 8 tens = (83 , 38 , 88 , 33)
- d** forty seven = (47 , 77 , 44 , 74)
- e** The value of 3 in 13 is (10 , 11 , 3 , 30)

2 Complete the following:

- a** 65 = tens + units
- b** The place value of 5 in 56 is
- c** 35 , 36 , 37 , 38 , ,
- d** 50 + = 54
- e** The smallest 2- different - digit number is

3 Put < , = or > :

- a** 36 63
- b** 5 tens 50
- c** 3 units + 2 tens Thirty two
- d** seventeen 70
- e** 60 30 + 40

4 Arrange in a descending order : 65 , 56 , 34 , 43 , 59

..... , , , ,

Arrange in an ascending order : 17 , 18 , 12 , 15 , 16

..... , , , ,

Find the result :

45 + 23 =

96 - 54 =

60 + 4 =

$$\begin{array}{r} 36 \\ + 23 \\ \hline \end{array}$$

.....

$$\begin{array}{r} 87 \\ - 45 \\ \hline \end{array}$$

.....

$$\begin{array}{r} 34 \\ - 34 \\ \hline \end{array}$$

.....

1 Find the result :

$45 + 3 = \dots\dots\dots$

$78 - 34 = \dots\dots\dots$

$34 + 12 + 51 = \dots\dots\dots$

$$\begin{array}{r} 56 \\ - 4 \\ \hline \end{array}$$

$$\begin{array}{r} 12 \\ + 73 \\ \hline \end{array}$$

2 Complete :

[a] $50 + \dots = 56$

[b] The number just **after** 55 is

[c] units + tens = 67

[d] 68 : (in words)

[e] The place - value of 7 in 67 is

3 Choose the correct answer :

[a] 5 tens + 7 units = (75 , 57 , 77 , 55)

[b] The value of 4 in 43 is (4 , 40 , 14 , 13)

[c] $35 + 4 = \dots\dots\dots$ (39 , 75 , 79 , 35)

[d] $40 + 30 = \dots\dots\dots$ (44 , 43 , 34 , 70)

[e] The greatest 2-digit number = (99 , 11 , 90 , 10)

4 Complete using the suitable sign ((< , = or >)):

[a] $54 - 24$ $50 - 20$

[c] $35 + 13$ $80 + 4$

[b] 3 units + 7 tens 37

[d] $30 + 22$ $76 - 24$

Arrange in an ascending order :

65 , 82 , 17 , 54

, , ,

1 Choose The correct answer :

- a 5 tens + 7 units = _____ (75 , 57 , 77 , 55)
 b The value of 3 in 43 is _____ (3 , 30 , 13 , 14)
 c $35 + 44 =$ _____ (39 , 75 , 79 , 35)
 d $40 + 30 =$ _____ (44 , 43 , 34 , 70)
 e The greatest 2-digit number = _____ (99 , 11 , 90 , 10)

2 Complete the following:

- a Twenty five (in digits) = _____
 b The smallest 2-digit number = _____
 c The place - value of 8 in 87 is _____
 d _____ units + _____ tens = 56
 e The number just after 29 is _____

3 Complete using the suitable sign ((< , = or >)):

$23 + 45 \square 98 - 31$

$4 \text{ tens} + 7 \text{ units} \square 47$

Arrange in a descending order :

82 , 55 , 15 , 51
 , , ,

4 Match

$45 + 24$

$24 + 32$

$14 + 23$

$45 + 21$

$89 - 52$

$89 - 20$

$98 - 22$

$89 - 33$

Complete in the same pattern :

- a) 10 , 20 , 30 , , ,
 b) 21 , 31 , 41 , , ,
 c) 98 , 87 , 76 , , ,

1 Find the result :

$$52 + 12 = \dots \dots$$

$$58 - 25 = \dots \dots$$

27

- 2

23

+ 15

23

+ 31

+ 25

2 Complete :

[a] The place -value of 8 in 78 is _____

[b] 25 : _____ (in words)

[c] _____ units + _____ tens = 93

[d] 13, 23, 33, _____, _____ after

[e] The number just before 88 is _____

3 Choose the correct answer :

[a] The number just after 67 is (66 , 68 , 57 , 77)

[b] The value of 7 in 73 is (7 , 70 , 74 , 77)

[c] + 5 = 25 (20 , 50 , 5 , 9)

[d] 6 units + 8 tens = (68 , 86 , 66 , 88)

[e] ninety seven = (97 , 90 , 70 , 79)

4 Complete using the suitable sign ((< , = or >)):

[a] $58 - 13$ $35 + 10$ | [b] 8 units + 7 tens 87

Arrange in an descending order : 85 , 43 , 58 , 37

, , ,

Sara has 54 flowers . Mona has 23 flowers .

How many flowers do they have altogether ?

The have = + = flowers

1 Find the result :

$32 + 14 = \dots \dots$

$68 - 27 = \dots \dots$

$20 + 13 + 25 = \dots \dots$

$$\begin{array}{r} 78 \\ - 3 \\ \hline \end{array}$$

.....

$$\begin{array}{r} 85 \\ + 12 \\ \hline \end{array}$$

.....

2 Complete :

[a] The place - value of 7 in 72 is _____

[b] 83 : _____ (in words)

[c] _____ units + _____ tens = 48

[d] 26 , 36 , 46 , _____ , _____ , _____

[e] The number just after 39 is

3 Choose the correct answer :

[a] The number just before 67 is (66 , 68 , 57 , 77)

[b] The value of 4 in 43 is (4 , 40 , 14 , 44)

[c] + 9 = 89 (80 , 90 , 8 , 9)

[d] 2 units + 3 tens = (32 , 23 , 22 , 33)

[e] sevnty nine = (97 , 90 , 70 , 79)

4 Complete using the suitable sign ((< , = or >)):

[a] $58 - 10$ $35 + 13$ | [b] 6 units + 2 tens 62

Arrange in an decending order : 58 , 34 , 85 , 73

, , ,

Fady had LE 75. He bought a toy car for LE 42 .
How much money were left with Fady .

The left money = - = LE

1 Choose The correct answer :

- a 3 units + 2 tens = (32 , 23 , 33 , 22)
 b The value of 7 in 73 is (7 , 70 , 17 , 37)
 c + 6 = 26 (20 , 60 , 6 , 2)
 d forty one = (14 , 40 , 11 , 41)
 e The greatest 2-digit number = (99 , 11 , 90 , 10)

2 Complete the following:

- a $70 + \dots = 78$
 b The number just before 48 is
 c tens + units = 23
 d 47 : (in words)
 e The place - value of 8 in 81 is

3 Complete using the suitable sign ((< , = or >)):

- [a] $74 - 54$ $50 - 20$ | [c] $45 + 44$ $37 + 52$
 [b] 4 units + 2 tens 42 | [d] $30 + 25$ $79 - 14$

Arrange in an ascending order : 75 , 52 , 27 , 44

, , ,

4 Write $\frac{1}{2}$ $\frac{1}{4}$ or $\frac{1}{3}$ under the figure :



.....

.....

.....

.....

.....

.....

1 Choose The correct answer :

- a** 5 tens + 7 units = _____ (75 , 57 , 77 , 55)
- b** The value of 4 in 43 is _____ (4 , 40 , 14 , 13)
- c** $35 + 4 =$ _____ (39 , 75 , 79 , 35)
- d** $40 + 30 =$ _____ (44 , 43 , 34 , 70)
- e** The greatest 2-digit number = _____ (99 , 11 , 90 , 10)

2 Complete the following:

- a** $50 + \dots = 54$
- b** The number just **after** 30 is
- c** _____ units + _____ tens = 67
- d** 68 : _____ (in words)
- e** The place - value of 7 in 67 is _____

3 Find the result :

$23 + 15 =$ _____	45	87	34
$98 - 62 =$ _____	$+ 12$	$- 24$	$- 14$
$50 + 2 =$ _____	_____	_____	_____

4 Complete using the suitable sign ((< , = or >)):

- [a] $54 - 24$ $50 - 20$ [c] $35 + 13$ $80 + 4$
- [b] 3 units + 7 tens 37 [d] $30 + 22$ $76 - 24$

Arrange in a descending order : 65 , 56 , 34 , 43 , 59

..... , , , ,

Sara had 99 pounds . He bought a hat for 41 pounds and a ball for 45 pounds . How much money were left with Fady .

He paid = + = LE

The left money = - = LE

1 Choose The correct answer :

- a 7 units + 5 tens = (75 , 57 , 77 , 55)
- b The value of 4 in 43 is (4 , 40 , 14 , 13)
- c $35 + 4 =$ (39 , 75 , 79 , 35)
- d $40 + 30 =$ (44 , 43 , 34 , 70)
- e The greatest 2-digit number = (99 , 11 , 90 , 10)

2 Complete the following:

- a The place - value of 2 in 72 is _____
- b The number just after 55 is
- c 23, 34 , 45 , _____ , _____ , _____
- d _____ tens + _____ units = 85
- e Thirty six : _____

3 Find the result :

$$68 - 32 = \dots\dots$$

$$52 + 47 = \dots\dots$$

$$\begin{array}{r} 79 \\ - 5 \\ \hline \end{array}$$

$$\begin{array}{r} 15 \\ + 22 \\ \hline \end{array}$$

$$\begin{array}{r} 13 \\ + 45 \\ + 21 \\ \hline \end{array}$$

4 Arrange in a **decending** order : 18 , 88 , 8 , 80

, , ,

Write the name of the shape



1 Complete the following:

a $30 + \dots = 35$

b The number just after 55 is

c 67, 56, 45,

d 7 units + 8 tens =

e The value of 4 in 43 is

2 Find the result :

$$\begin{array}{r} 29 \\ - 27 \\ \hline \end{array}$$

.....

$$\begin{array}{r} 45 \\ + 23 \\ \hline \end{array}$$

.....

$87 - 4 = \dots \dots$

$72 + 4 = \dots \dots$

$12 + 12 + 14 = \dots$

3 Arrange in a **decending** order : 18 , 88 , 8 , 80

, , ,

Complete using the suitable sign ($<$, $=$ or $>$):

[a] $54 - 24$ $50 - 20$ | [c] $35 + 13$ $80 + 4$

4 Write the amount of money :



..... + + + +

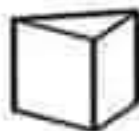
..... pounds



..... + + + +

..... pounds

Write the name of the shape



1 Find the result :

$$68 - 32 = \dots\dots\dots$$

$$52 + 47 = \dots\dots\dots$$

$$79$$

$$- 5$$

$$15$$

$$+ 22$$

$$13$$

$$+ 45$$

$$+ 21$$

2 Complete the following:

a The place-value of 8 in 78 is _____

b 25: _____ (in words)

c _____ units + _____ tens = 93

d 13, 23, 33, _____, _____, _____

3 choose the correct answer :

a 5 units + 2 tens = (52 , 25 , 55 , 22)

b ninety four = (94 , 49 , 99 , 44)

c the smallest 2-digit number is (10 , 11 , 99 , 98)

d the number just after 49 is (48 , 40 , 50 , 59)

e the value of 8 in 85 is (80 , 50 , 58 , 85)

4 Arrange in a **decending** order : 85 , 43 , 58 , 37

, , ,

Put < , = or > :









$$24 + 53 \quad \square$$

$$77$$

$$98 - 82 \quad \square$$

sixteen

Write the amount of money :

			
			
+ + + + + + + +			
..... pounds			

Write the name of the shape



1 Find the result :

$$\begin{array}{r} 29 \\ - 27 \\ \hline \end{array}$$

$$\begin{array}{r} 45 \\ + 23 \\ \hline \end{array}$$

$87 - 4 = \underline{\quad\quad}$


$72 + 4 = \underline{\quad\quad}$

$12 + 12 + 14 = \underline{\quad\quad}$

2 Write the amount of money :



Write the name of the shape



3 Choose the correct answer :

[a] 7 units + 5 tens = _____ (75 , 57 , 77 , 55)


[b] The value of 4 in 43 is _____ (4 , 40 , 14 , 13)

[c] 35 + 4 = _____ (39 , 75 , 79 , 35)

[d] 40 + 30 = _____ (44 , 43 , 34 , 70)

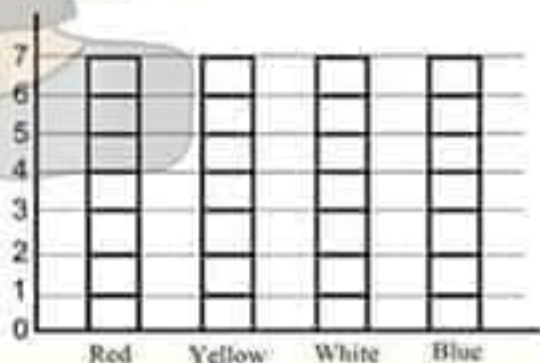
[e] The greatest 2-digit number = _____ (99 , 11 , 90 , 10)

4 Arrange in a **decending** order : 34 , 14 , 43 , 33



Complete the following table

Colour of flowers	Number
Red	5
Yellow	4
White	2
Blue	6



Find the result :

$14 + 22 = \underline{\quad}$

42

76

58

$85 - 75 = \underline{\quad}$

$+ 26$

$- 12$

$- 27$

$5 + 30 = \underline{\quad}$

Complete :

[a] the place - value of the digit 5 in 85 is

[b] the day comes after Sunday is

[c] the greatest 2 - digit number is

[d] $59 = \dots\dots$ tens + $\dots\dots$ units

[e] 21 , 31 , 41 , 51 ,,,

choose the correct answer :

[a] 5 units + 2 tens = (52 , 25 , 55 , 22)

[b] ninety four = (94 , 49 , 99 , 44)

[c] the smallest 2-digit number is (10 , 11 , 99 , 98)

[d] the number just after 49 is (48 , 40 , 50 , 59)

[e] the value of 8 in 85 is (80 , 50 , 58 , 85)

Put < , = or > :

$24 + 53$

77

$98 - 82$

sixteen

$42 + 34$

7 units , 6 tens

$98 - 65$

$62 + 21$

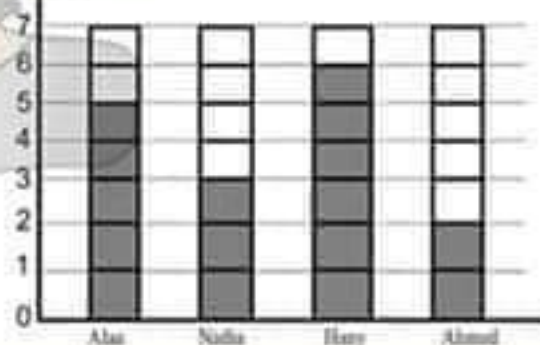
Arrange the following numbers in an ascending order

45 , 6 , 80 , 75 , 61

..... , , , ,

Complete the following table

Name	Money
Alaa
Nadia
Hany
Ahmed



Name : _____

Write the name of the shape





